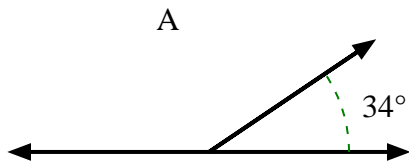


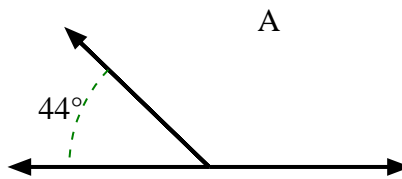


Find the value of 'A' in the set of supplementary angles.

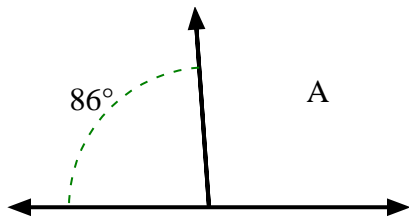
1)



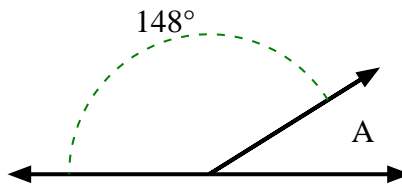
2)



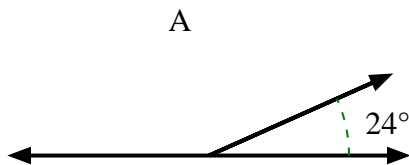
3)



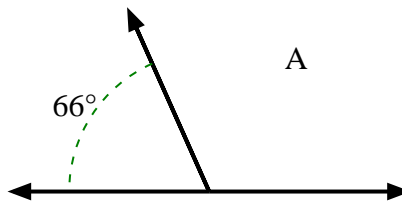
4)



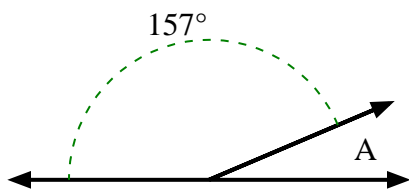
5)



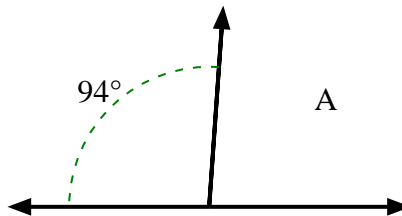
6)



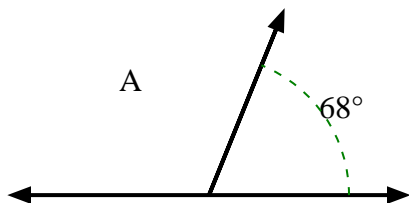
7)



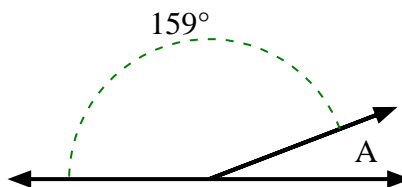
8)



9)



10)



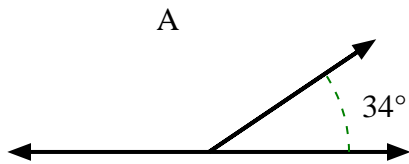
Answers

- 1. _____
- 2. _____
- 3. _____
- 4. _____
- 5. _____
- 6. _____
- 7. _____
- 8. _____
- 9. _____
- 10. _____

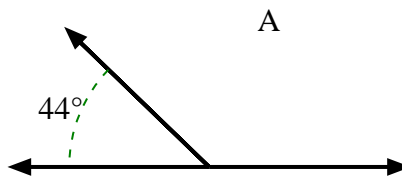


Find the value of 'A' in the set of supplementary angles.

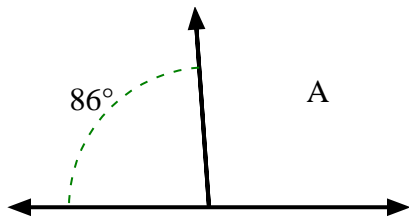
1)



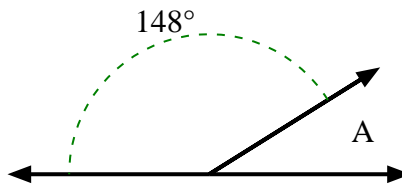
2)



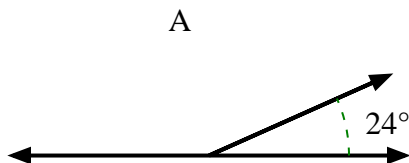
3)



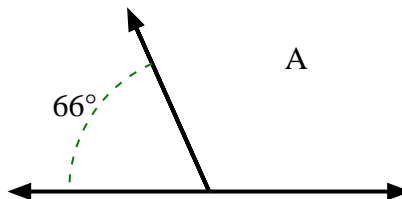
4)



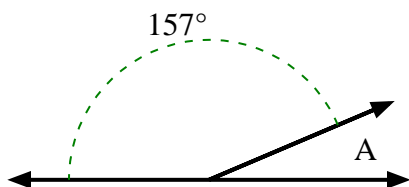
5)



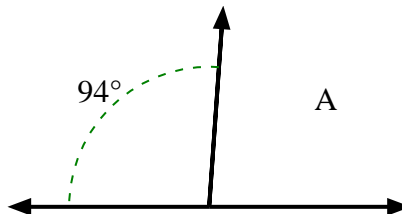
6)



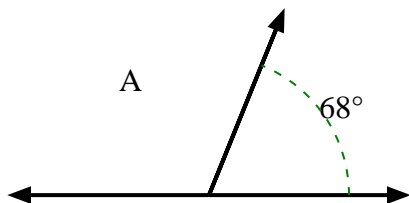
7)



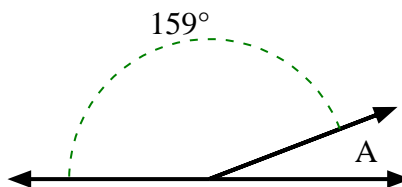
8)



9)



10)



Answers

1. **146°**

2. **136°**

3. **94°**

4. **32°**

5. **156°**

6. **114°**

7. **23°**

8. **86°**

9. **112°**

10. **21°**