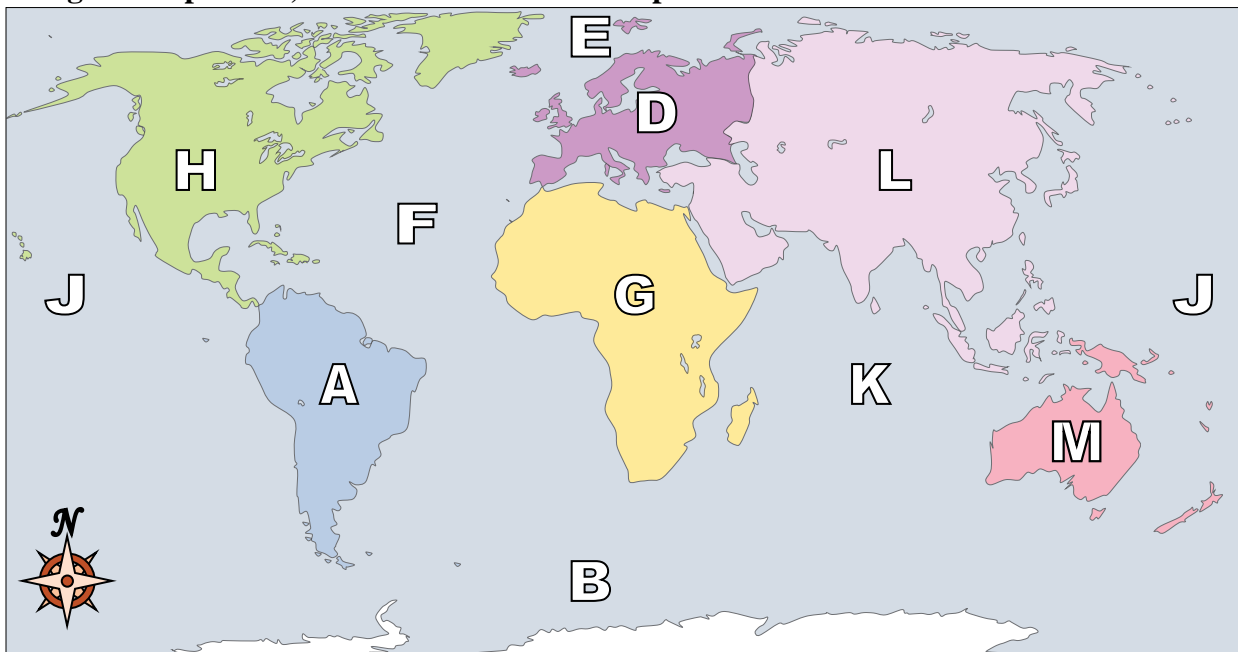




Using the map below, determine which letter represents each continent or ocean.



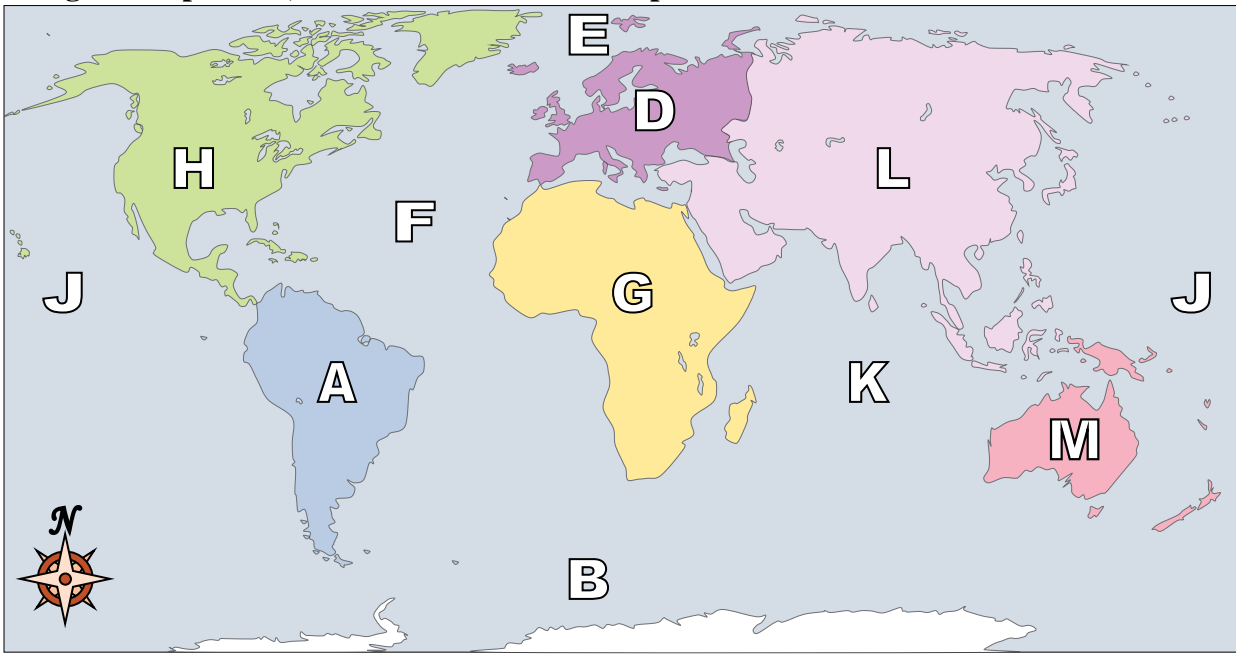
Answers

1. _____
2. _____
3. _____
4. _____
5. _____
6. _____
7. _____
8. _____
9. _____
10. _____
11. _____
12. _____
13. _____
14. _____
15. _____
16. _____
17. _____

- 1) North America _____
- 2) Africa _____
- 3) Australia _____
- 4) Europe _____
- 5) Atlantic Ocean _____
- 6) Asia _____
- 7) Indian Ocean _____
- 8) Antarctica _____
- 9) South America _____
- 10) Southern Ocean _____
- 11) Pacific Ocean _____
- 12) Arctic Ocean _____
- 13) If you were in South America and flew east to Australia which continent would you fly over?
A. Antarctica B. Asia C. Africa D. North America
- 14) If you were in Europe and went south which continent would you end up in?
A. Africa B. South America C. North America D. Australia
- 15) Which continent is not touching any other continents?
A. Antarctica B. Europe C. Africa D. Asia
- 16) Which ocean touches South America's western border?
A. Arctic Ocean B. Pacific Ocean C. Indian Ocean D. Atlantic Ocean
- 17) Which of these oceans is not touching North America?
A. Indian Ocean B. Pacific Ocean C. Arctic Ocean D. Atlantic Ocean



Using the map below, determine which letter represents each continent or ocean.



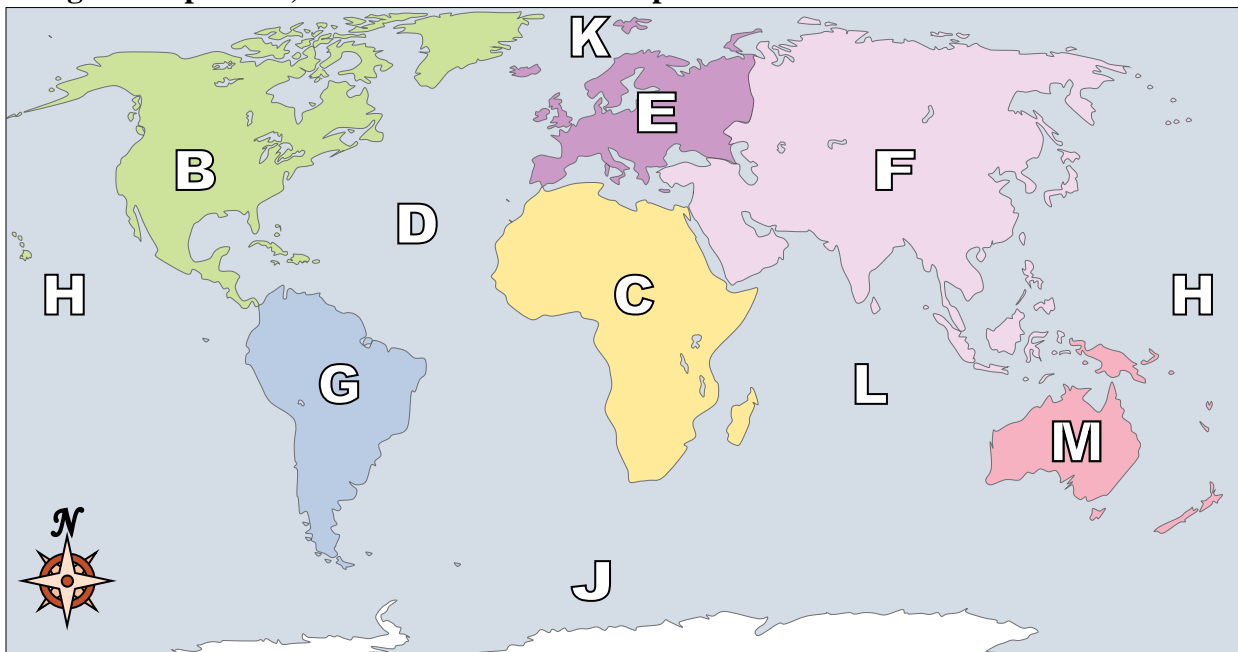
Answers

- 1) North America H
- 2) Africa G
- 3) Australia M
- 4) Europe D
- 5) Atlantic Ocean F
- 6) Asia L
- 7) Indian Ocean K
- 8) Antarctica C
- 9) South America A
- 10) Southern Ocean B
- 11) Pacific Ocean J
- 12) Arctic Ocean E
- 13) If you were in South America and flew east to Australia which continent would you fly over?
A. Antarctica B. Asia C. Africa D. North America
- 14) If you were in Europe and went south which continent would you end up in?
A. Africa B. South America C. North America D. Australia
- 15) Which continent is not touching any other continents?
A. Antarctica B. Europe C. Africa D. Asia
- 16) Which ocean touches South America's western border?
A. Arctic Ocean B. Pacific Ocean C. Indian Ocean D. Atlantic Ocean
- 17) Which of these oceans is not touching North America?
A. Indian Ocean B. Pacific Ocean C. Arctic Ocean D. Atlantic Ocean

- 1. H
- 2. G
- 3. M
- 4. D
- 5. F
- 6. L
- 7. K
- 8. C
- 9. A
- 10. B
- 11. J
- 12. E
- 13. C
- 14. A
- 15. A
- 16. B
- 17. A



Using the map below, determine which letter represents each continent or ocean.



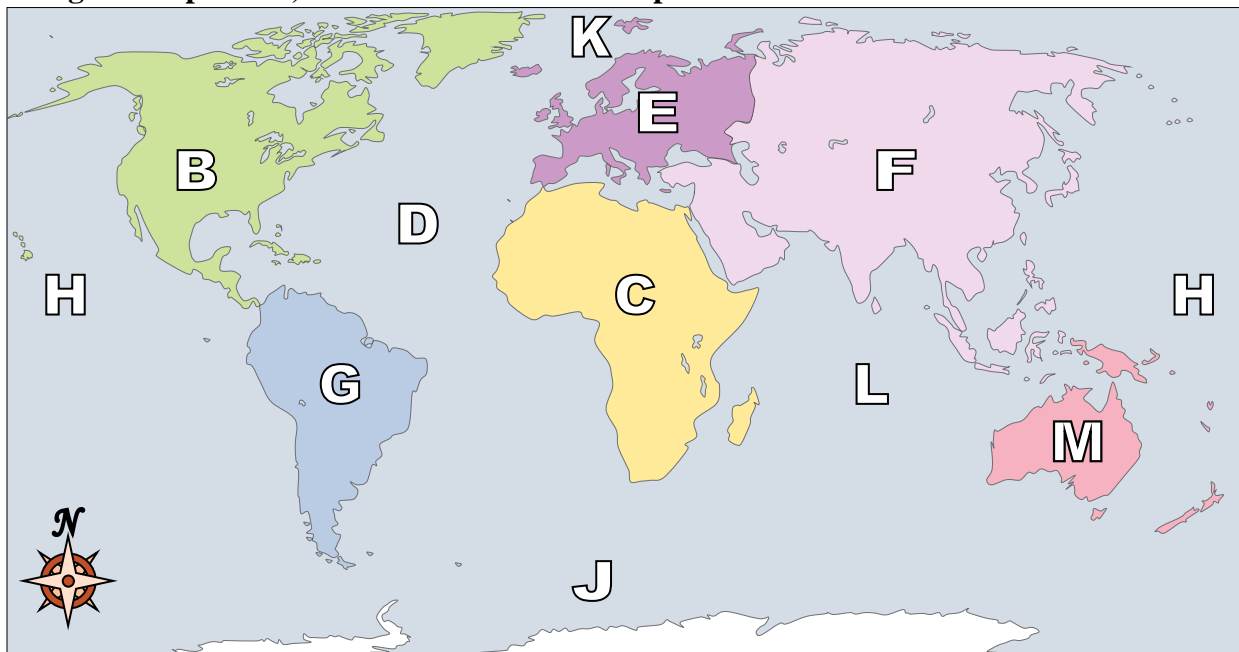
Answers

1. _____
2. _____
3. _____
4. _____
5. _____
6. _____
7. _____
8. _____
9. _____
10. _____
11. _____
12. _____
13. _____
14. _____
15. _____
16. _____
17. _____

- 1) North America _____
- 2) Africa _____
- 3) Southern Ocean _____
- 4) Pacific Ocean _____
- 5) Atlantic Ocean _____
- 6) Indian Ocean _____
- 7) Australia _____
- 8) Asia _____
- 9) Arctic Ocean _____
- 10) Europe _____
- 11) South America _____
- 12) Antarctica _____
- 13) Which ocean touches Africa's eastern border?
A. Indian Ocean B. Pacific Ocean C. Arctic Ocean D. Atlantic Ocean
- 14) Which ocean touches South America's western border?
A. Pacific Ocean B. Arctic Ocean C. Atlantic Ocean D. Indian Ocean
- 15) If you were in Europe and went south which continent would you end up in?
A. Africa B. Australia C. North America D. South America
- 16) If you were in Europe and went east which continent would you end up in?
A. Asia B. South America C. North America D. Africa
- 17) If you were in South America and flew east to Australia which continent would you fly over?
A. Europe B. Africa C. Asia D. North America



Using the map below, determine which letter represents each continent or ocean.



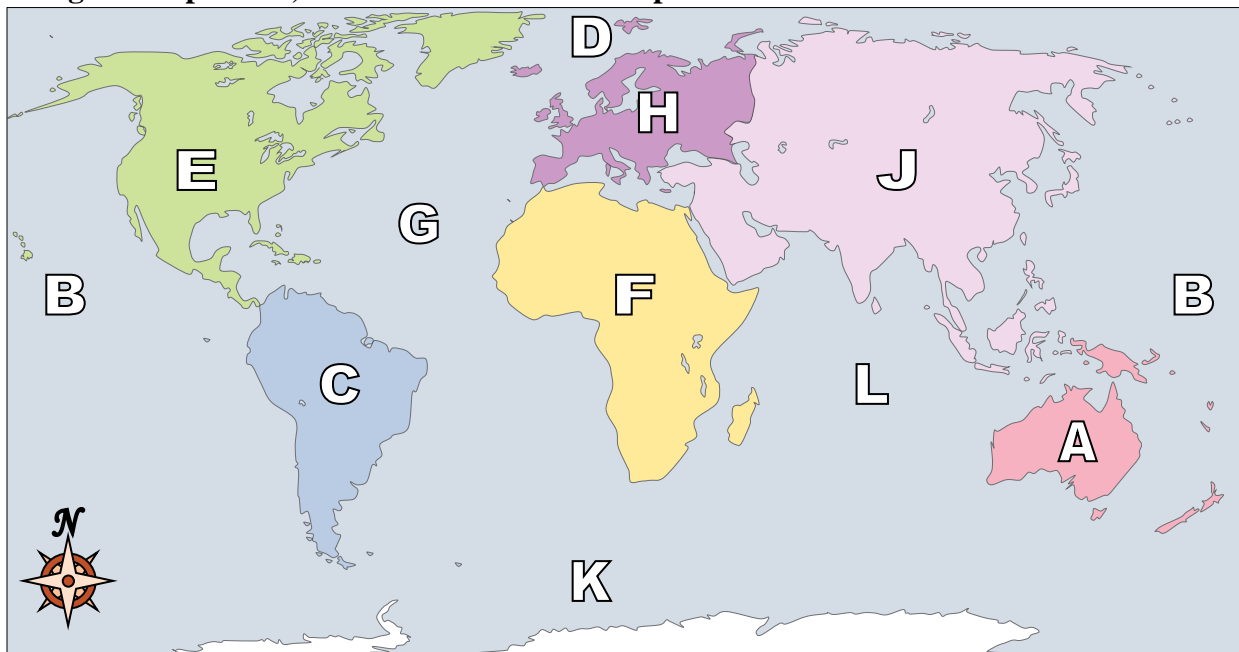
Answers

- 1) North America B
- 2) Africa C
- 3) Southern Ocean J
- 4) Pacific Ocean H
- 5) Atlantic Ocean D
- 6) Indian Ocean L
- 7) Australia M
- 8) Asia F
- 9) Arctic Ocean K
- 10) Europe E
- 11) South America G
- 12) Antarctica A
- 13) Which ocean touches Africa's eastern border?
A. Indian Ocean B. Pacific Ocean C. Arctic Ocean D. Atlantic Ocean
- 14) Which ocean touches South America's western border?
A. Pacific Ocean B. Arctic Ocean C. Atlantic Ocean D. Indian Ocean
- 15) If you were in Europe and went south which continent would you end up in?
A. Africa B. Australia C. North America D. South America
- 16) If you were in Europe and went east which continent would you end up in?
A. Asia B. South America C. North America D. Africa
- 17) If you were in South America and flew east to Australia which continent would you fly over?
A. Europe B. Africa C. Asia D. North America

- 1. B
- 2. C
- 3. J
- 4. H
- 5. D
- 6. L
- 7. M
- 8. F
- 9. K
- 10. E
- 11. G
- 12. A
- 13. A
- 14. A
- 15. A
- 16. A
- 17. B



Using the map below, determine which letter represents each continent or ocean.



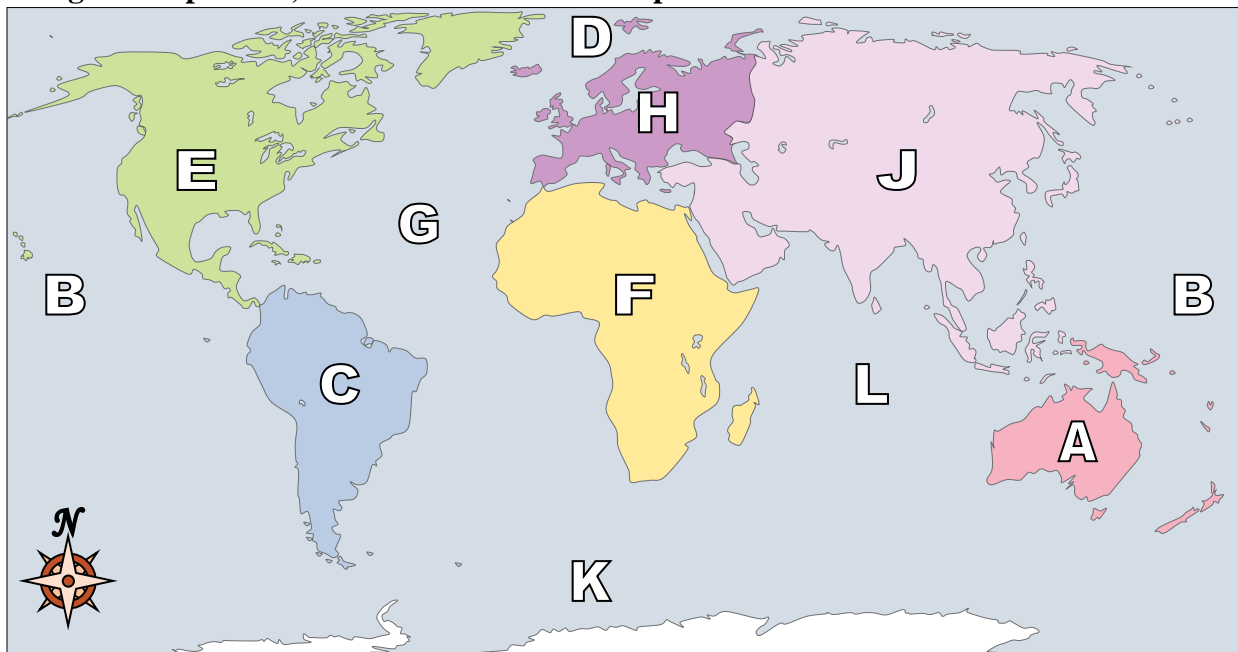
Answers

1. _____
2. _____
3. _____
4. _____
5. _____
6. _____
7. _____
8. _____
9. _____
10. _____
11. _____
12. _____
13. _____
14. _____
15. _____
16. _____
17. _____

- 1) Africa _____
- 2) North America _____
- 3) Arctic Ocean _____
- 4) Indian Ocean _____
- 5) South America _____
- 6) Pacific Ocean _____
- 7) Southern Ocean _____
- 8) Antarctica _____
- 9) Asia _____
- 10) Australia _____
- 11) Europe _____
- 12) Atlantic Ocean _____
- 13) Which ocean touches South America's western border?
A. Indian Ocean B. Atlantic Ocean C. Arctic Ocean D. Pacific Ocean
- 14) If you were in Europe and went east which continent would you end up in?
A. Asia B. Africa C. North America D. South America
- 15) Which ocean touches South America's eastern border?
A. Atlantic Ocean B. Pacific Ocean C. Arctic Ocean D. Indian Ocean
- 16) Which ocean touches Africa's eastern border?
A. Pacific Ocean B. Atlantic Ocean C. Arctic Ocean D. Indian Ocean
- 17) If you were in Europe and went south which continent would you end up in?
A. Australia B. Asia C. Africa D. North America



Using the map below, determine which letter represents each continent or ocean.



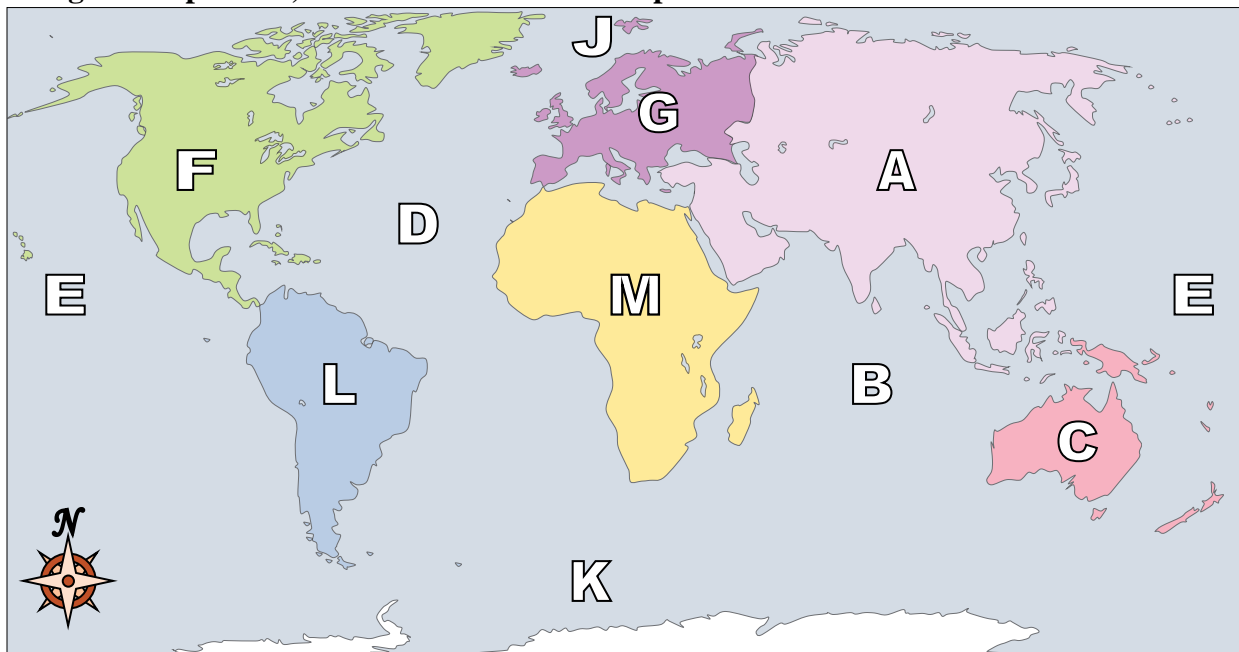
Answers

- 1) Africa F
- 2) North America E
- 3) Arctic Ocean D
- 4) Indian Ocean L
- 5) South America C
- 6) Pacific Ocean B
- 7) Southern Ocean K
- 8) Antarctica M
- 9) Asia J
- 10) Australia A
- 11) Europe H
- 12) Atlantic Ocean G
- 13) Which ocean touches South America's western border?
A. Indian Ocean B. Atlantic Ocean C. Arctic Ocean D. Pacific Ocean
- 14) If you were in Europe and went east which continent would you end up in?
A. Asia B. Africa C. North America D. South America
- 15) Which ocean touches South America's eastern border?
A. Atlantic Ocean B. Pacific Ocean C. Arctic Ocean D. Indian Ocean
- 16) Which ocean touches Africa's eastern border?
A. Pacific Ocean B. Atlantic Ocean C. Arctic Ocean D. Indian Ocean
- 17) If you were in Europe and went south which continent would you end up in?
A. Australia B. Asia C. Africa D. North America

- 1. F
- 2. E
- 3. D
- 4. L
- 5. C
- 6. B
- 7. K
- 8. M
- 9. J
- 10. A
- 11. H
- 12. G
- 13. D
- 14. A
- 15. A
- 16. D
- 17. C



Using the map below, determine which letter represents each continent or ocean.



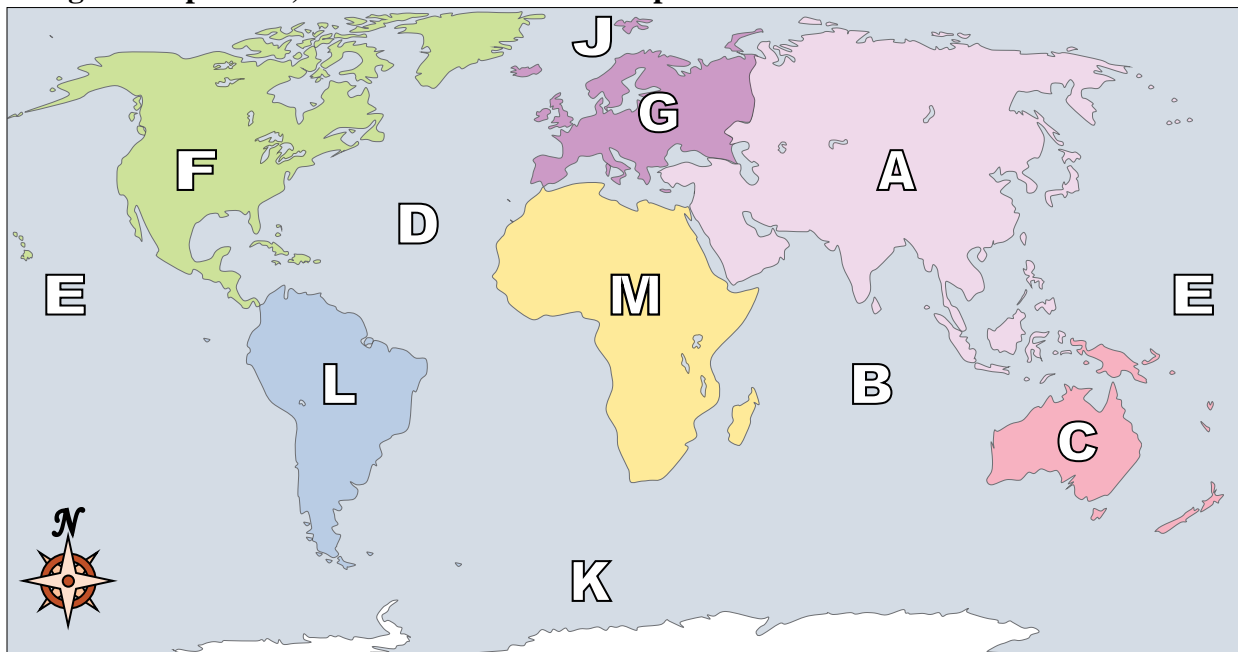
Answers

1. _____
2. _____
3. _____
4. _____
5. _____
6. _____
7. _____
8. _____
9. _____
10. _____
11. _____
12. _____
13. _____
14. _____
15. _____
16. _____
17. _____

- 1) Atlantic Ocean _____
- 2) Antarctica _____
- 3) Australia _____
- 4) Southern Ocean _____
- 5) Asia _____
- 6) Europe _____
- 7) South America _____
- 8) Indian Ocean _____
- 9) Pacific Ocean _____
- 10) Arctic Ocean _____
- 11) Africa _____
- 12) North America _____
- 13) Which ocean touches South America's western border?
A. Pacific Ocean B. Arctic Ocean C. Indian Ocean D. Atlantic Ocean
- 14) Which of these continents is closest to Europe?
A. Africa B. South America C. Australia D. Antarctica
- 15) Which ocean touches Africa's eastern border?
A. Arctic Ocean B. Indian Ocean C. Atlantic Ocean D. Pacific Ocean
- 16) Which of these oceans is not touching North America?
A. Indian Ocean B. Atlantic Ocean C. Pacific Ocean D. Arctic Ocean
- 17) If you were in Africa and went south which continent would you end up in?
A. North America B. Antarctica C. Australia D. South America



Using the map below, determine which letter represents each continent or ocean.



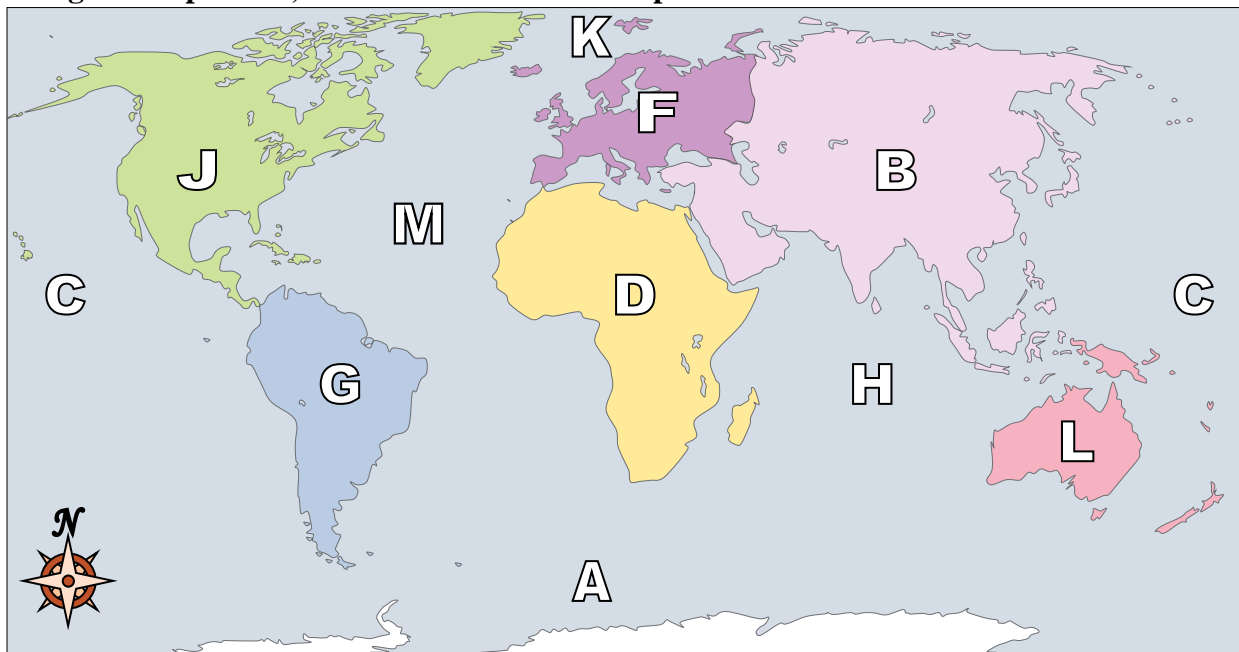
Answers

- 1. **D**
- 2. **H**
- 3. **C**
- 4. **K**
- 5. **A**
- 6. **G**
- 7. **L**
- 8. **B**
- 9. **E**
- 10. **J**
- 11. **M**
- 12. **F**
- 13. **A**
- 14. **A**
- 15. **B**
- 16. **A**
- 17. **B**

- 1) Atlantic Ocean **D**
- 2) Antarctica **H**
- 3) Australia **C**
- 4) Southern Ocean **K**
- 5) Asia **A**
- 6) Europe **G**
- 7) South America **L**
- 8) Indian Ocean **B**
- 9) Pacific Ocean **E**
- 10) Arctic Ocean **J**
- 11) Africa **M**
- 12) North America **F**
- 13) Which ocean touches South America's western border?
A. Pacific Ocean B. Arctic Ocean C. Indian Ocean D. Atlantic Ocean
- 14) Which of these continents is closest to Europe?
A. Africa B. South America C. Australia D. Antarctica
- 15) Which ocean touches Africa's eastern border?
A. Arctic Ocean B. Indian Ocean C. Atlantic Ocean D. Pacific Ocean
- 16) Which of these oceans is not touching North America?
A. Indian Ocean B. Atlantic Ocean C. Pacific Ocean D. Arctic Ocean
- 17) If you were in Africa and went south which continent would you end up in?
A. North America B. Antarctica C. Australia D. South America



Using the map below, determine which letter represents each continent or ocean.



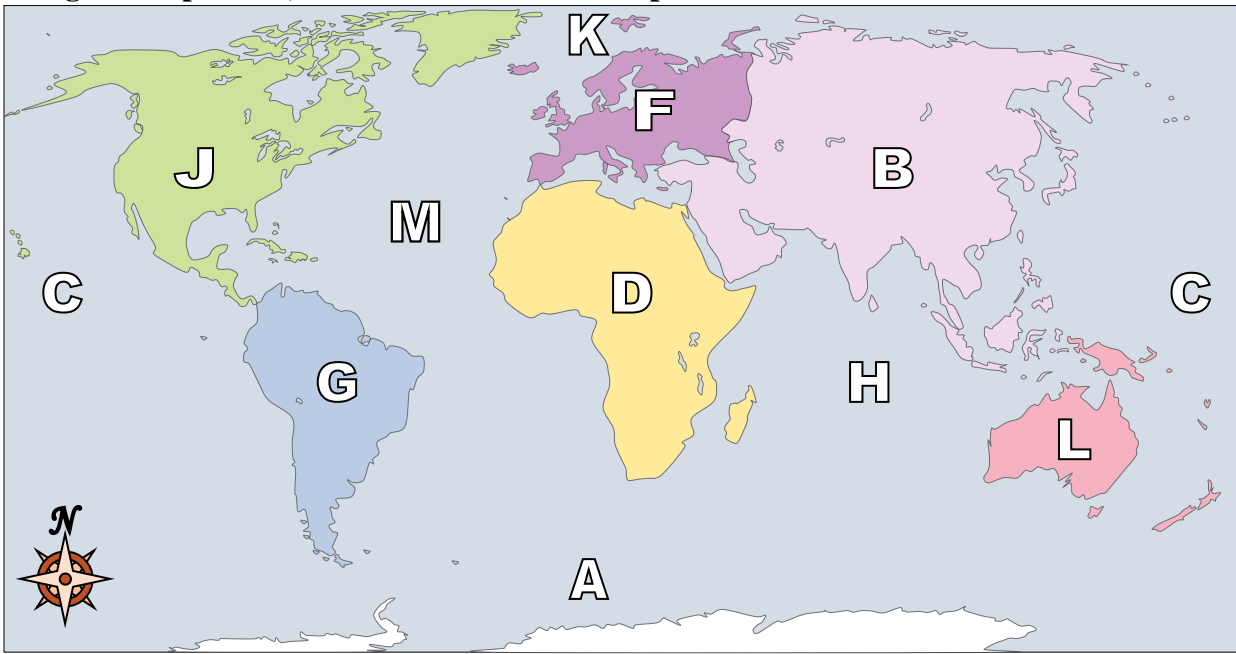
Answers

1. _____
2. _____
3. _____
4. _____
5. _____
6. _____
7. _____
8. _____
9. _____
10. _____
11. _____
12. _____
13. _____
14. _____
15. _____
16. _____
17. _____

- 1) Atlantic Ocean _____
- 2) North America _____
- 3) Pacific Ocean _____
- 4) Europe _____
- 5) Africa _____
- 6) Australia _____
- 7) Asia _____
- 8) South America _____
- 9) Southern Ocean _____
- 10) Arctic Ocean _____
- 11) Indian Ocean _____
- 12) Antarctica _____
- 13) If you were in Europe and went south which continent would you end up in?
A. Asia B. Africa C. North America D. South America
- 14) Which of these continents is closest to Africa?
A. Antarctica B. South America C. Europe D. Australia
- 15) Which continent is touching Asia's western border?
A. Australia B. North America C. Africa D. Antarctica
- 16) If you were in South America and flew east to Australia which continent would you fly over?
A. Africa B. Europe C. Antarctica D. North America
- 17) Which continent is furthest south?
A. Australia B. Europe C. Antarctica D. Asia



Using the map below, determine which letter represents each continent or ocean.



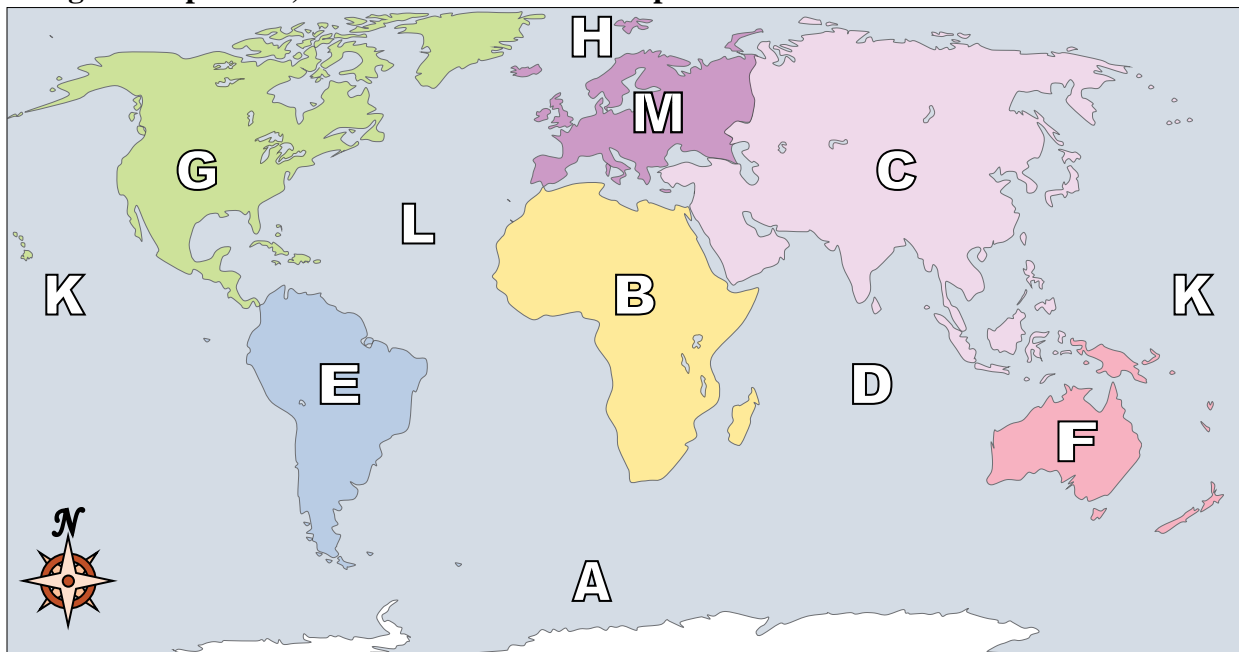
Answers

- 1) Atlantic Ocean M
- 2) North America J
- 3) Pacific Ocean C
- 4) Europe F
- 5) Africa D
- 6) Australia L
- 7) Asia B
- 8) South America G
- 9) Southern Ocean A
- 10) Arctic Ocean K
- 11) Indian Ocean H
- 12) Antarctica E
- 13) If you were in Europe and went south which continent would you end up in?
A. Asia B. Africa C. North America D. South America
- 14) Which of these continents is closest to Africa?
A. Antarctica B. South America C. Europe D. Australia
- 15) Which continent is touching Asia's western border?
A. Australia B. North America C. Africa D. Antarctica
- 16) If you were in South America and flew east to Australia which continent would you fly over?
A. Africa B. Europe C. Antarctica D. North America
- 17) Which continent is furthest south?
A. Australia B. Europe C. Antarctica D. Asia

- 1. M
- 2. J
- 3. C
- 4. F
- 5. D
- 6. L
- 7. B
- 8. G
- 9. A
- 10. K
- 11. H
- 12. E
- 13. B
- 14. C
- 15. C
- 16. A
- 17. C



Using the map below, determine which letter represents each continent or ocean.



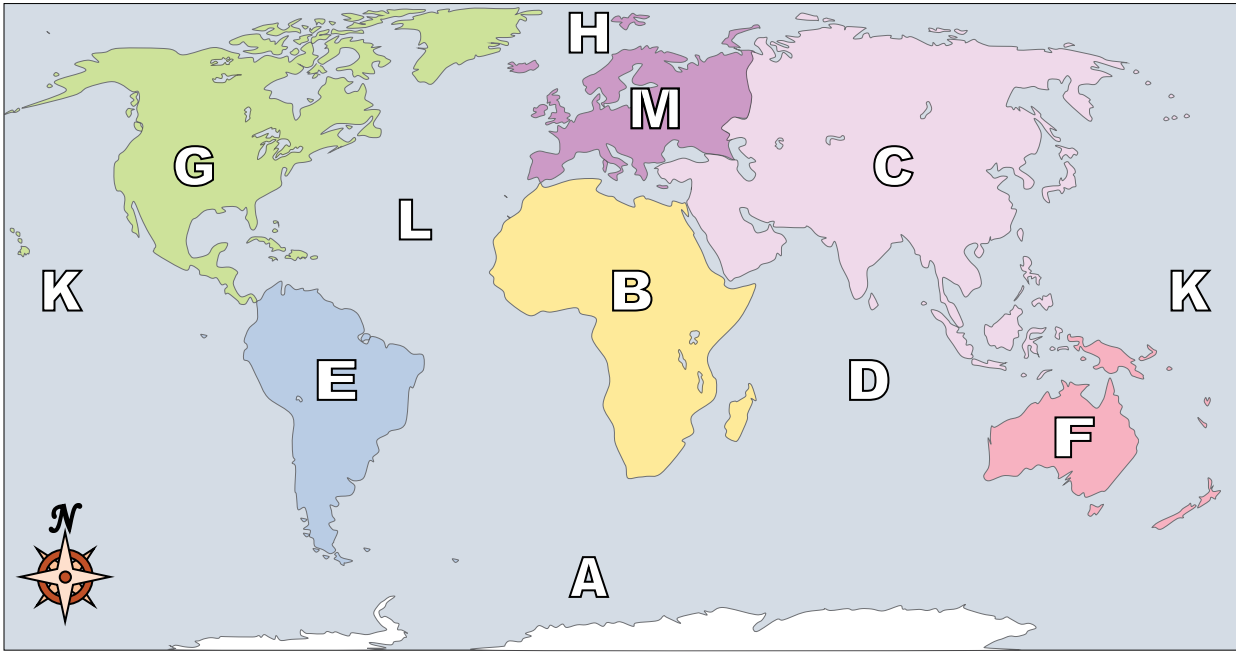
Answers

1. _____
2. _____
3. _____
4. _____
5. _____
6. _____
7. _____
8. _____
9. _____
10. _____
11. _____
12. _____
13. _____
14. _____
15. _____
16. _____
17. _____

- 1) Asia _____
- 2) Europe _____
- 3) South America _____
- 4) Arctic Ocean _____
- 5) Pacific Ocean _____
- 6) Australia _____
- 7) Africa _____
- 8) North America _____
- 9) Southern Ocean _____
- 10) Indian Ocean _____
- 11) Atlantic Ocean _____
- 12) Antarctica _____
- 13) If you were in North America and went west which continent would you end up in?
A. Africa B. South America C. Australia D. Asia
- 14) Which continent is touching Asia's western border?
A. Australia B. South America C. Europe D. North America
- 15) Which continent is touching the eastern border of Europe?
A. Australia B. Africa C. Asia D. North America
- 16) Which ocean touches South America's eastern border?
A. Atlantic Ocean B. Arctic Ocean C. Pacific Ocean D. Indian Ocean
- 17) If you were in Europe and went east which continent would you end up in?
A. Australia B. Antarctica C. South America D. Asia



Using the map below, determine which letter represents each continent or ocean.



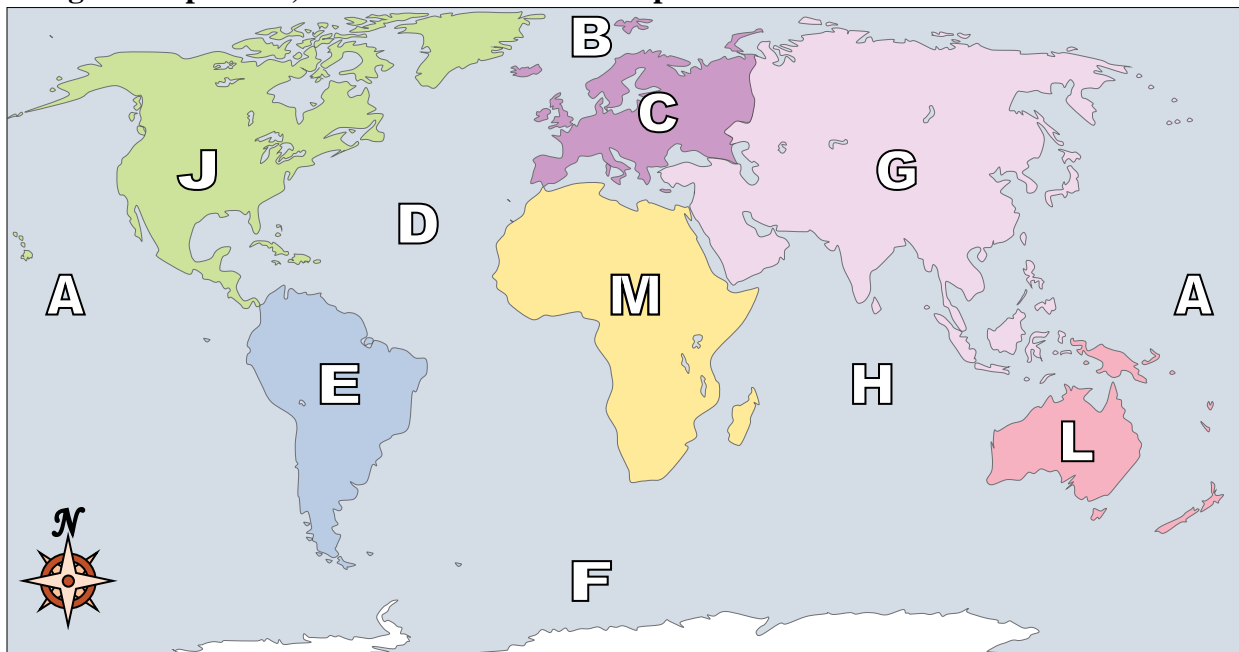
Answers

- 1) Asia C
- 2) Europe M
- 3) South America E
- 4) Arctic Ocean H
- 5) Pacific Ocean K
- 6) Australia F
- 7) Africa B
- 8) North America G
- 9) Southern Ocean A
- 10) Indian Ocean D
- 11) Atlantic Ocean L
- 12) Antarctica J
- 13) If you were in North America and went west which continent would you end up in?
A. Africa B. South America C. Australia D. Asia
- 14) Which continent is touching Asia's western border?
A. Australia B. South America C. Europe D. North America
- 15) Which continent is touching the eastern border of Europe?
A. Australia B. Africa C. Asia D. North America
- 16) Which ocean touches South America's eastern border?
A. Atlantic Ocean B. Arctic Ocean C. Pacific Ocean D. Indian Ocean
- 17) If you were in Europe and went east which continent would you end up in?
A. Australia B. Antarctica C. South America D. Asia

- 1. C
- 2. M
- 3. E
- 4. H
- 5. K
- 6. F
- 7. B
- 8. G
- 9. A
- 10. D
- 11. L
- 12. J
- 13. D
- 14. C
- 15. C
- 16. A
- 17. D



Using the map below, determine which letter represents each continent or ocean.



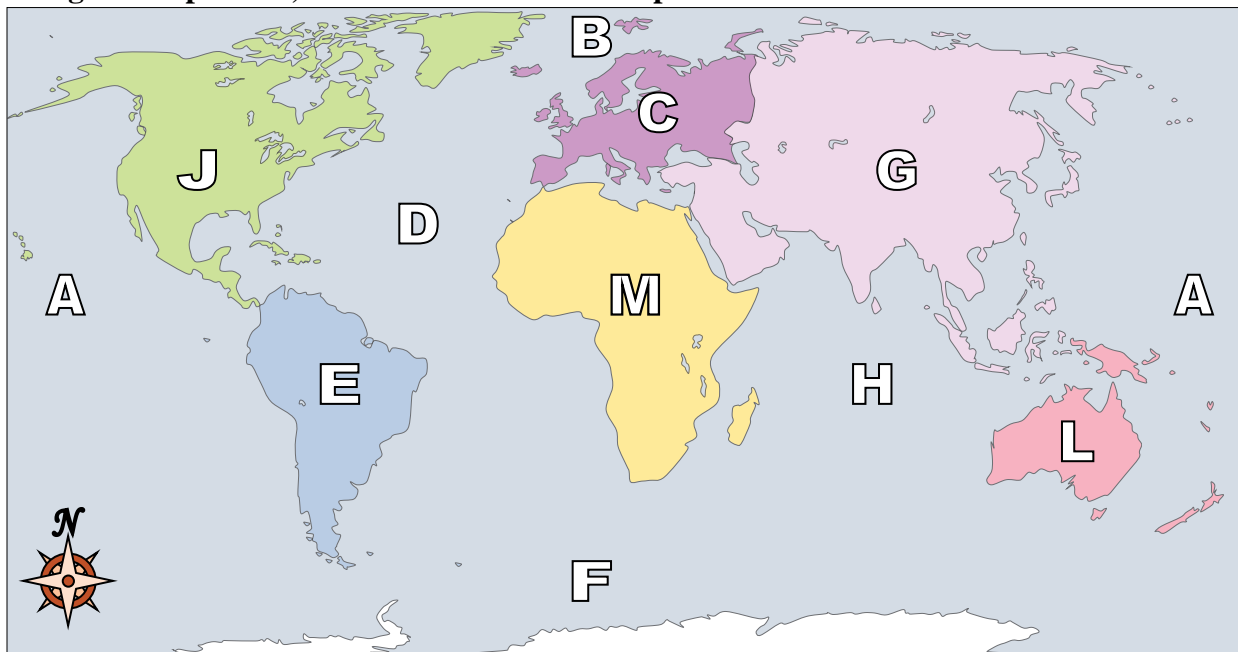
Answers

1. _____
2. _____
3. _____
4. _____
5. _____
6. _____
7. _____
8. _____
9. _____
10. _____
11. _____
12. _____
13. _____
14. _____
15. _____
16. _____
17. _____

- 1) Africa _____
- 2) Australia _____
- 3) Europe _____
- 4) South America _____
- 5) Southern Ocean _____
- 6) Antarctica _____
- 7) Indian Ocean _____
- 8) Arctic Ocean _____
- 9) Asia _____
- 10) Atlantic Ocean _____
- 11) Pacific Ocean _____
- 12) North America _____
- 13) If you were in Africa and went south which continent would you end up in?
A. Australia B. South America C. Antarctica D. North America
- 14) If you were in Europe and went east which continent would you end up in?
A. North America B. Africa C. Asia D. Antarctica
- 15) Which of these continents is closest to Africa?
A. Australia B. North America C. Europe D. South America
- 16) Which ocean touches Africa's eastern border?
A. Arctic Ocean B. Atlantic Ocean C. Pacific Ocean D. Indian Ocean
- 17) If you were in Europe and went south which continent would you end up in?
A. South America B. North America C. Africa D. Asia



Using the map below, determine which letter represents each continent or ocean.



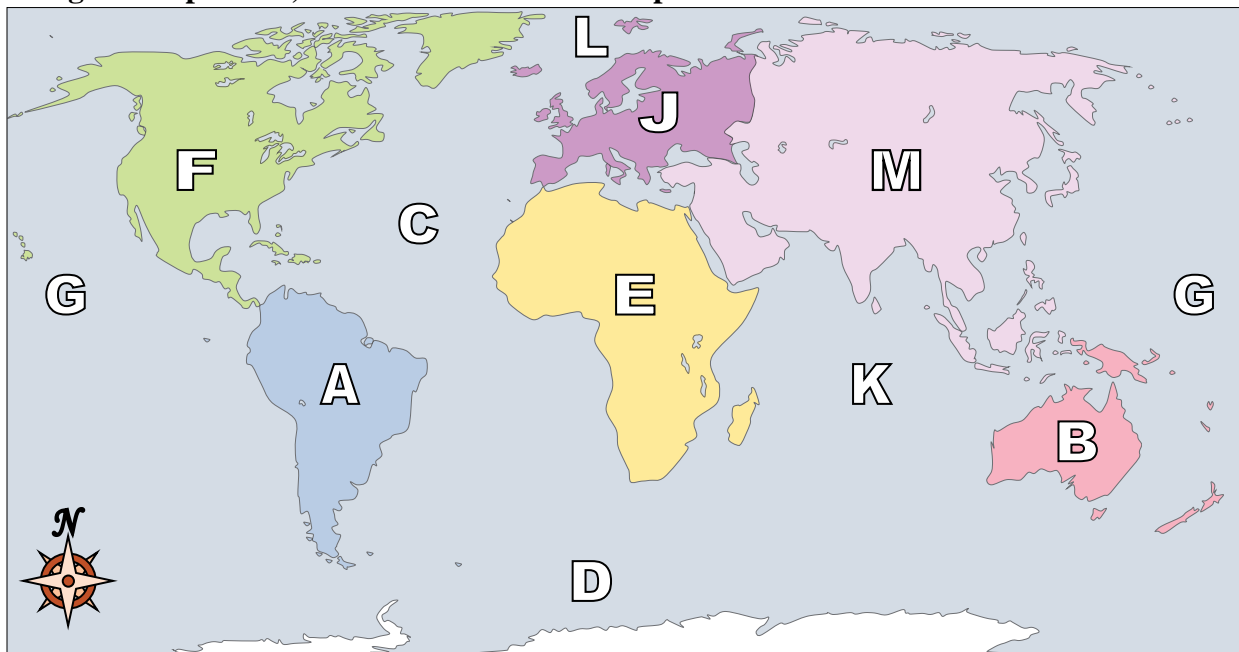
Answers

- 1) Africa M
- 2) Australia L
- 3) Europe C
- 4) South America E
- 5) Southern Ocean F
- 6) Antarctica K
- 7) Indian Ocean H
- 8) Arctic Ocean B
- 9) Asia G
- 10) Atlantic Ocean D
- 11) Pacific Ocean A
- 12) North America J
- 13) If you were in Africa and went south which continent would you end up in?
A. Australia B. South America C. Antarctica D. North America
- 14) If you were in Europe and went east which continent would you end up in?
A. North America B. Africa C. Asia D. Antarctica
- 15) Which of these continents is closest to Africa?
A. Australia B. North America C. Europe D. South America
- 16) Which ocean touches Africa's eastern border?
A. Arctic Ocean B. Atlantic Ocean C. Pacific Ocean D. Indian Ocean
- 17) If you were in Europe and went south which continent would you end up in?
A. South America B. North America C. Africa D. Asia

- 1. M
- 2. L
- 3. C
- 4. E
- 5. F
- 6. K
- 7. H
- 8. B
- 9. G
- 10. D
- 11. A
- 12. J
- 13. C
- 14. C
- 15. C
- 16. D
- 17. C



Using the map below, determine which letter represents each continent or ocean.



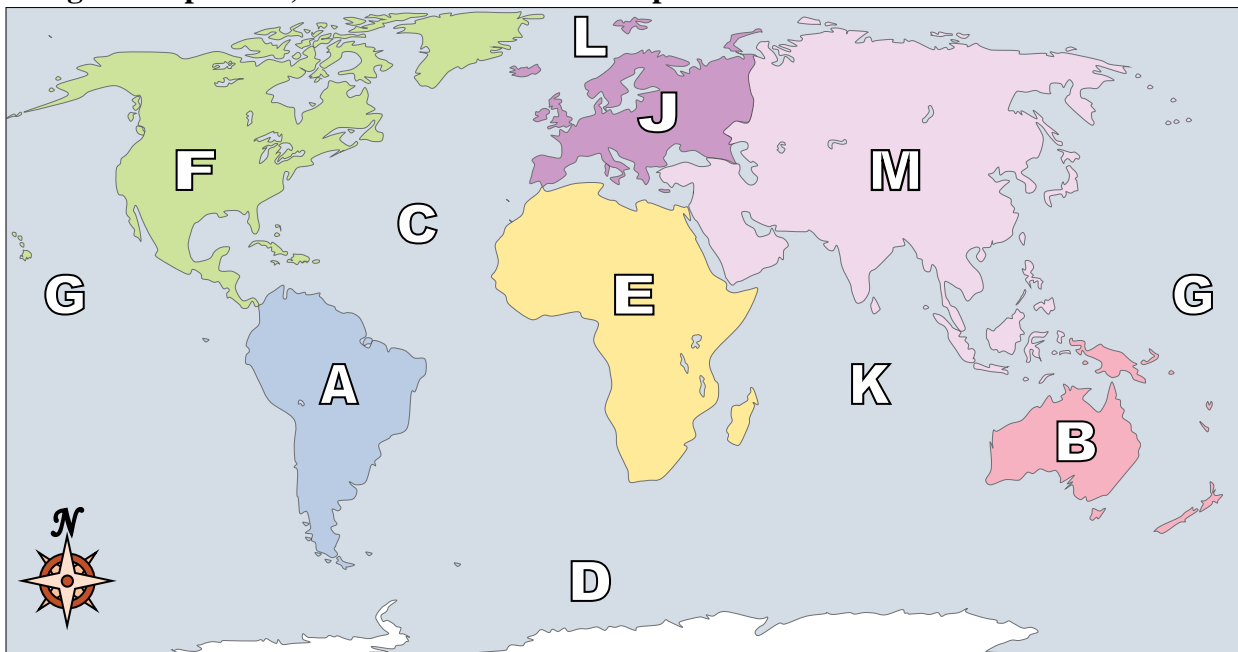
Answers

1. _____
2. _____
3. _____
4. _____
5. _____
6. _____
7. _____
8. _____
9. _____
10. _____
11. _____
12. _____
13. _____
14. _____
15. _____
16. _____
17. _____

- 1) Indian Ocean _____
- 2) Africa _____
- 3) South America _____
- 4) Asia _____
- 5) Southern Ocean _____
- 6) Europe _____
- 7) Arctic Ocean _____
- 8) Australia _____
- 9) Atlantic Ocean _____
- 10) Pacific Ocean _____
- 11) Antarctica _____
- 12) North America _____
- 13) If you were in Africa and went south which continent would you end up in?
A. North America B. Australia C. South America D. Antarctica
- 14) Which ocean touches Africa's eastern border?
A. Indian Ocean B. Atlantic Ocean C. Arctic Ocean D. Pacific Ocean
- 15) Which continent is touching Asia's western border?
A. South America B. Africa C. North America D. Australia
- 16) Which ocean touches South America's western border?
A. Pacific Ocean B. Indian Ocean C. Arctic Ocean D. Atlantic Ocean
- 17) If you were in South America and flew east to Australia which continent would you fly over?
A. Africa B. Asia C. Europe D. North America



Using the map below, determine which letter represents each continent or ocean.



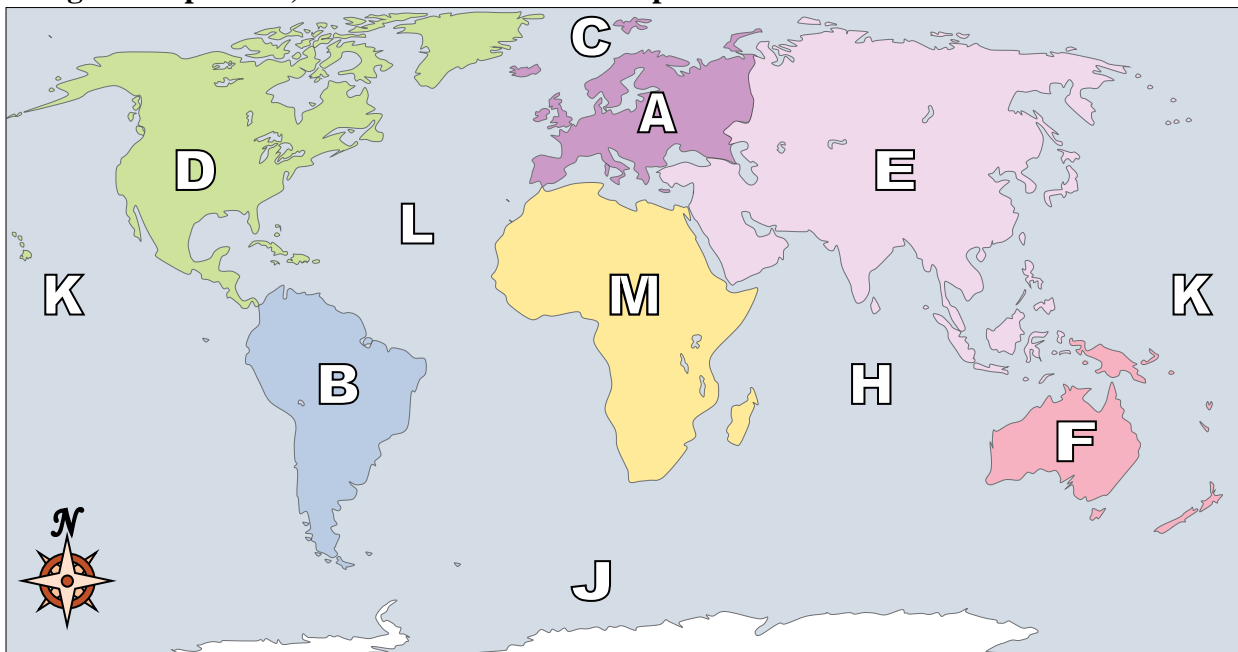
Answers

- 1) Indian Ocean K
- 2) Africa E
- 3) South America A
- 4) Asia M
- 5) Southern Ocean D
- 6) Europe J
- 7) Arctic Ocean L
- 8) Australia B
- 9) Atlantic Ocean C
- 10) Pacific Ocean G
- 11) Antarctica H
- 12) North America F
- 13) If you were in Africa and went south which continent would you end up in?
A. North America B. Australia C. South America D. Antarctica
- 14) Which ocean touches Africa's eastern border?
A. Indian Ocean B. Atlantic Ocean C. Arctic Ocean D. Pacific Ocean
- 15) Which continent is touching Asia's western border?
A. South America B. Africa C. North America D. Australia
- 16) Which ocean touches South America's western border?
A. Pacific Ocean B. Indian Ocean C. Arctic Ocean D. Atlantic Ocean
- 17) If you were in South America and flew east to Australia which continent would you fly over?
A. Africa B. Asia C. Europe D. North America

- 1. K
- 2. E
- 3. A
- 4. M
- 5. D
- 6. J
- 7. L
- 8. B
- 9. C
- 10. G
- 11. H
- 12. F
- 13. D
- 14. A
- 15. B
- 16. A
- 17. A



Using the map below, determine which letter represents each continent or ocean.



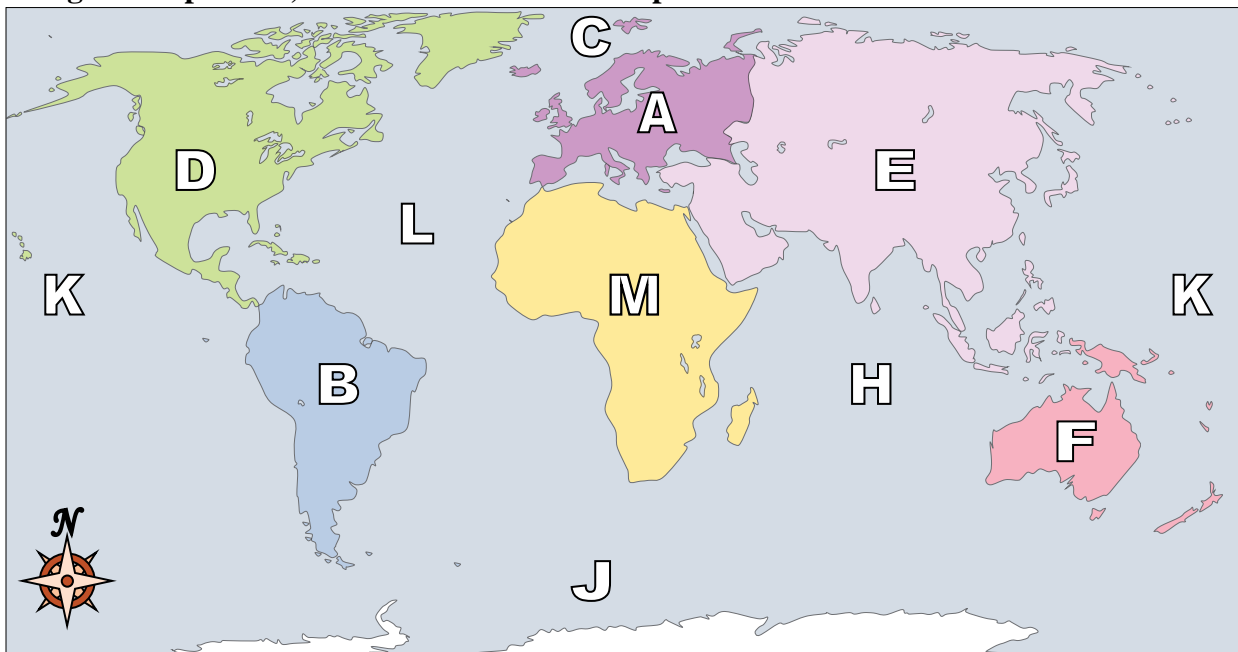
Answers

1. _____
2. _____
3. _____
4. _____
5. _____
6. _____
7. _____
8. _____
9. _____
10. _____
11. _____
12. _____
13. _____
14. _____
15. _____
16. _____
17. _____

- 1) Southern Ocean _____
- 2) South America _____
- 3) Africa _____
- 4) Indian Ocean _____
- 5) Australia _____
- 6) Asia _____
- 7) Pacific Ocean _____
- 8) Atlantic Ocean _____
- 9) Antarctica _____
- 10) Arctic Ocean _____
- 11) North America _____
- 12) Europe _____
- 13) Which ocean touches South America's western border?
A. Pacific Ocean B. Atlantic Ocean C. Indian Ocean D. Arctic Ocean
- 14) Which continent is touching Asia's western border?
A. Antarctica B. Africa C. South America D. North America
- 15) Which ocean touches South America's eastern border?
A. Pacific Ocean B. Indian Ocean C. Arctic Ocean D. Atlantic Ocean
- 16) Which continent is not touching any other continents?
A. Asia B. Africa C. South America D. Australia
- 17) Which of these continents is closest to Africa?
A. North America B. South America C. Australia D. Asia



Using the map below, determine which letter represents each continent or ocean.



Answers

1. **J**

2. **B**

3. **M**

4. **H**

5. **F**

6. **E**

7. **K**

8. **L**

9. **G**

10. **C**

11. **D**

12. **A**

13. **A**

14. **B**

15. **D**

16. **D**

17. **D**

1) Southern Ocean **J**

2) South America **B**

3) Africa **M**

4) Indian Ocean **H**

5) Australia **F**

6) Asia **E**

7) Pacific Ocean **K**

8) Atlantic Ocean **L**

9) Antarctica **G**

10) Arctic Ocean **C**

11) North America **D**

12) Europe **A**

13) Which ocean touches South America's western border?

- A. Pacific Ocean B. Atlantic Ocean C. Indian Ocean D. Arctic Ocean

14) Which continent is touching Asia's western border?

- A. Antarctica B. Africa C. South America D. North America

15) Which ocean touches South America's eastern border?

- A. Pacific Ocean B. Indian Ocean C. Arctic Ocean D. Atlantic Ocean

16) Which continent is not touching any other continents?

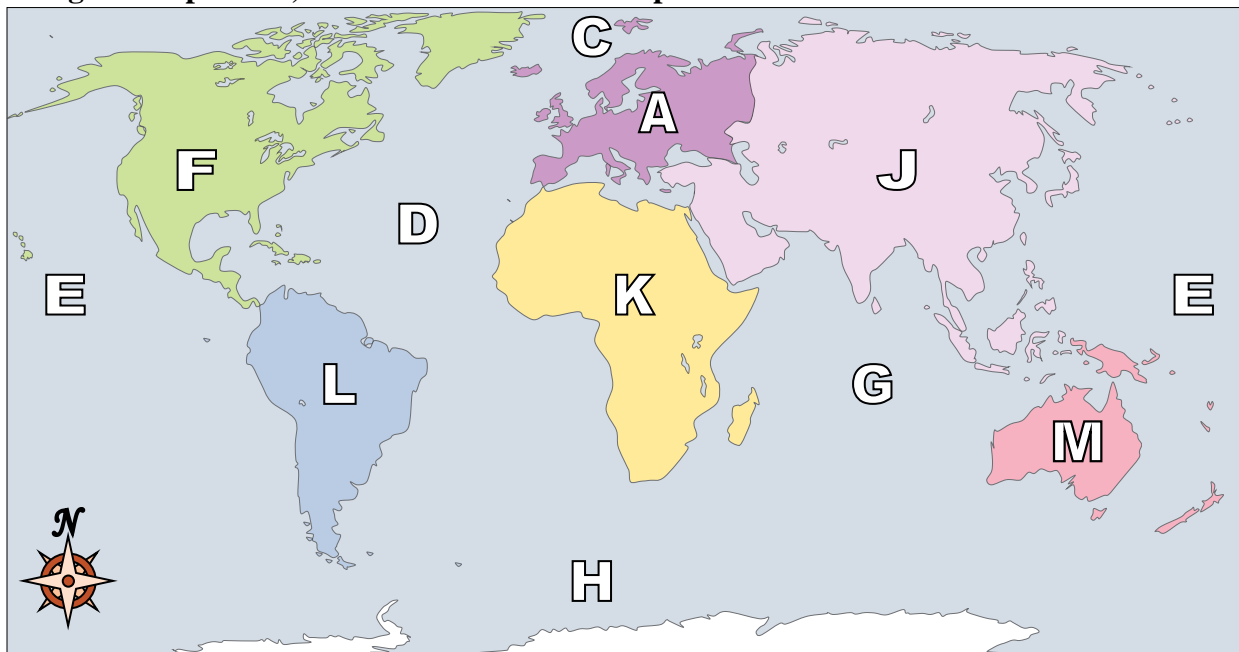
- A. Asia B. Africa C. South America D. Australia

17) Which of these continents is closest to Africa?

- A. North America B. South America C. Australia D. Asia



Using the map below, determine which letter represents each continent or ocean.



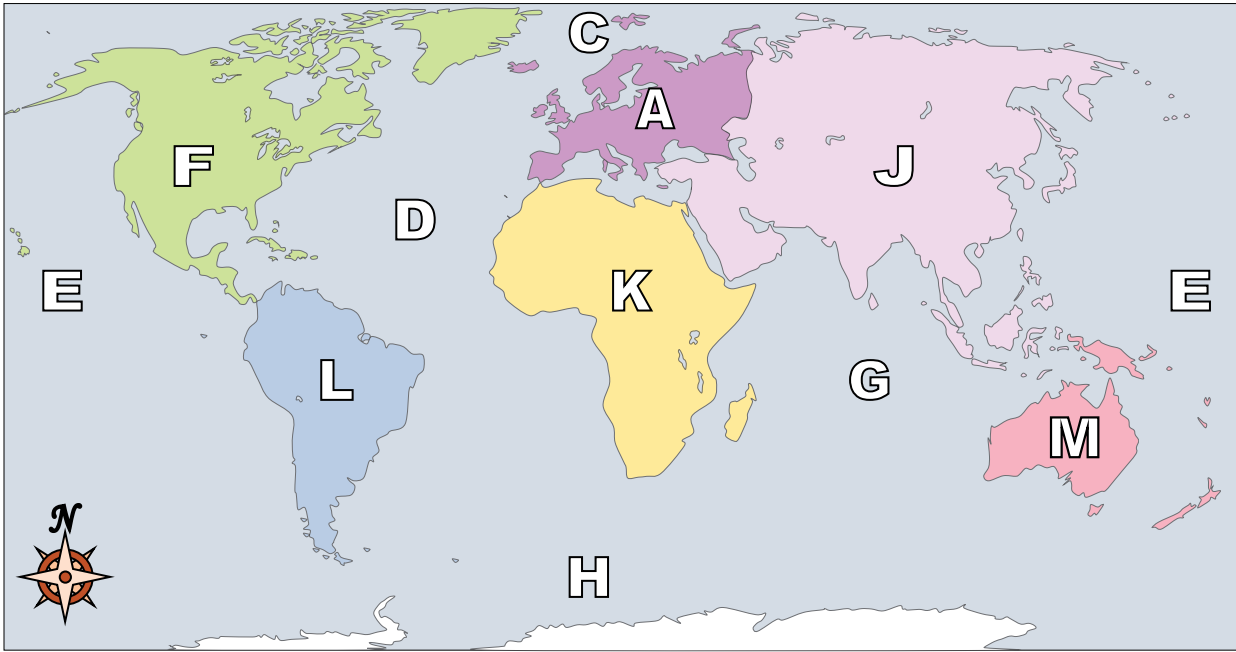
Answers

1. _____
2. _____
3. _____
4. _____
5. _____
6. _____
7. _____
8. _____
9. _____
10. _____
11. _____
12. _____
13. _____
14. _____
15. _____
16. _____
17. _____

- 1) Australia _____
- 2) Pacific Ocean _____
- 3) Southern Ocean _____
- 4) North America _____
- 5) Asia _____
- 6) Antarctica _____
- 7) Atlantic Ocean _____
- 8) Indian Ocean _____
- 9) Europe _____
- 10) Arctic Ocean _____
- 11) South America _____
- 12) Africa _____
- 13) Which ocean touches Africa's eastern border?
A. Pacific Ocean B. Atlantic Ocean C. Indian Ocean D. Arctic Ocean
- 14) Which ocean touches South America's western border?
A. Pacific Ocean B. Indian Ocean C. Atlantic Ocean D. Arctic Ocean
- 15) Which ocean touches Africa's western border?
A. Atlantic Ocean B. Pacific Ocean C. Arctic Ocean D. Indian Ocean
- 16) If you were in South America and flew east to Australia which continent would you fly over?
A. Asia B. Europe C. Antarctica D. Africa
- 17) Which continent is not touching any other continents?
A. Asia B. Africa C. Antarctica D. Europe



Using the map below, determine which letter represents each continent or ocean.



Answers

- 1) Australia M
- 2) Pacific Ocean E
- 3) Southern Ocean H
- 4) North America F
- 5) Asia J
- 6) Antarctica B
- 7) Atlantic Ocean D
- 8) Indian Ocean G
- 9) Europe A
- 10) Arctic Ocean C
- 11) South America L
- 12) Africa K
- 13) Which ocean touches Africa's eastern border?
A. Pacific Ocean B. Atlantic Ocean C. Indian Ocean D. Arctic Ocean
- 14) Which ocean touches South America's western border?
A. Pacific Ocean B. Indian Ocean C. Atlantic Ocean D. Arctic Ocean
- 15) Which ocean touches Africa's western border?
A. Atlantic Ocean B. Pacific Ocean C. Arctic Ocean D. Indian Ocean
- 16) If you were in South America and flew east to Australia which continent would you fly over?
A. Asia B. Europe C. Antarctica D. Africa
- 17) Which continent is not touching any other continents?
A. Asia B. Africa C. Antarctica D. Europe

- 1. M
- 2. E
- 3. H
- 4. F
- 5. J
- 6. B
- 7. D
- 8. G
- 9. A
- 10. C
- 11. L
- 12. K
- 13. C
- 14. A
- 15. A
- 16. D
- 17. C