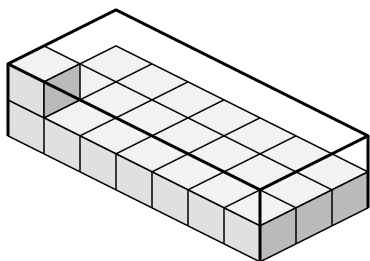


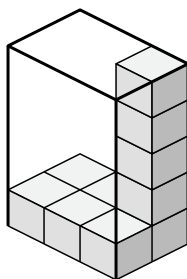


Determine the volume of each box. Each block is 1 cubic unit (u^3).

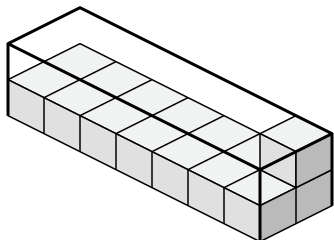
1)



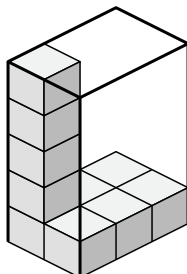
2)



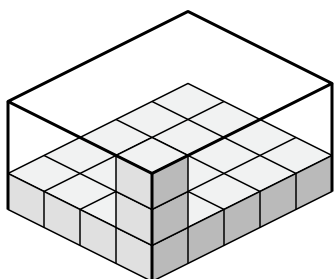
3)



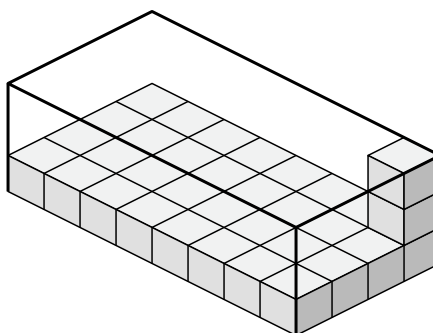
4)



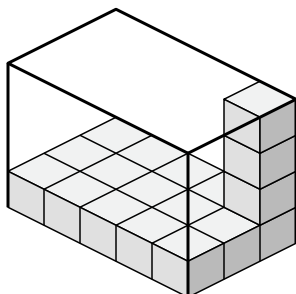
5)



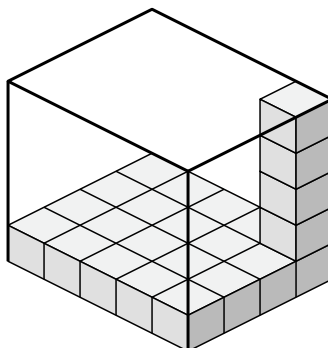
6)



7)



8)



Answers

1. _____

2. _____

3. _____

4. _____

5. _____

6. _____

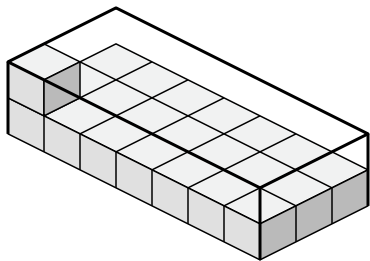
7. _____

8. _____

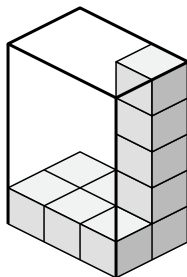


Determine the volume of each box. Each block is 1 cubic unit (u^3).

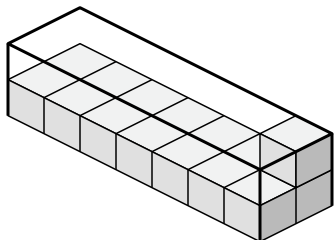
1)



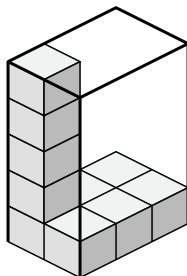
2)



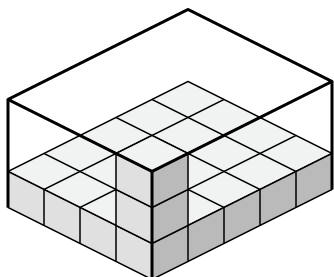
3)



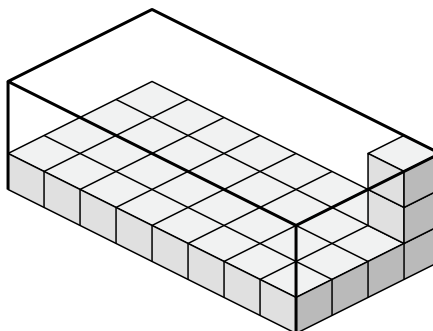
4)



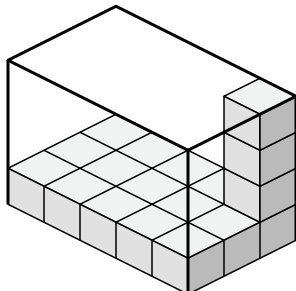
5)



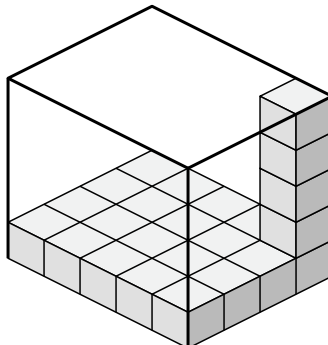
6)



7)



8)



Answers

1. 42 u^3

2. 30 u^3

3. 28 u^3

4. 30 u^3

5. 60 u^3

6. 96 u^3

7. 60 u^3

8. 100 u^3