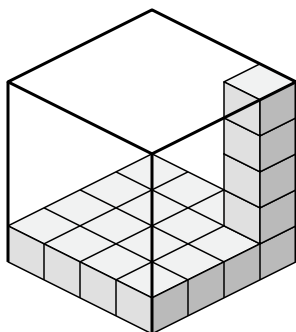




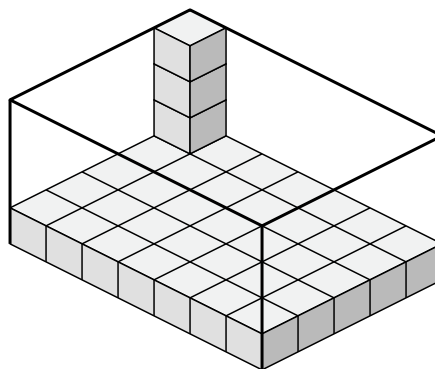
Determine the volume of each box. Each block is 1 cubic unit (u^3).

Answers

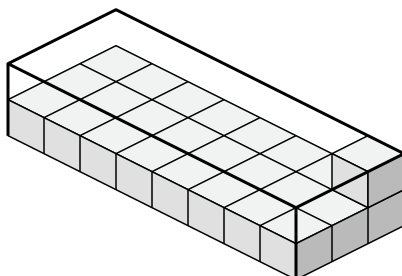
1)



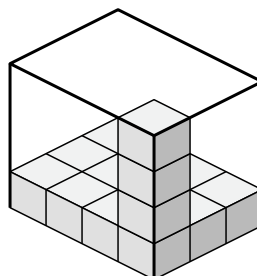
2)



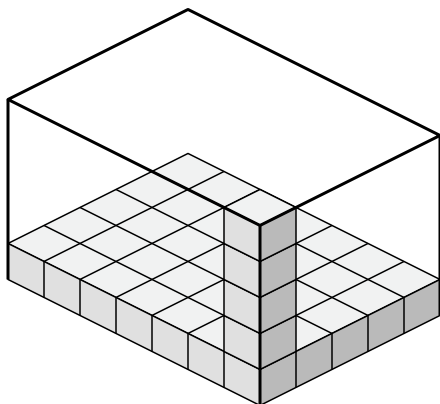
3)



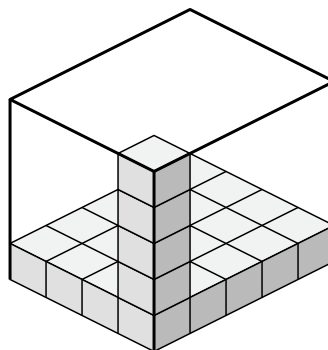
4)



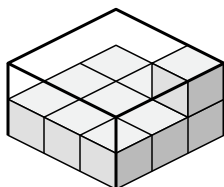
5)



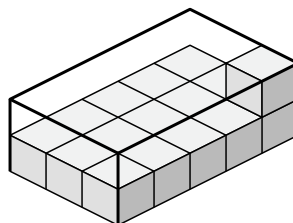
6)



7)



8)



1. _____

2. _____

3. _____

4. _____

5. _____

6. _____

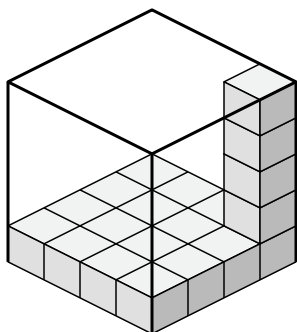
7. _____

8. _____

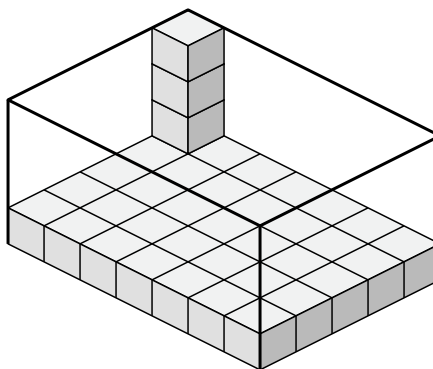


Determine the volume of each box. Each block is 1 cubic unit (u^3).

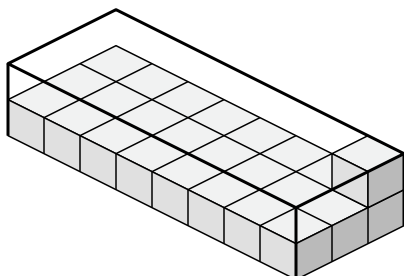
1)



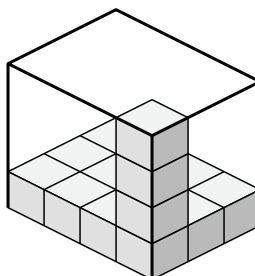
2)



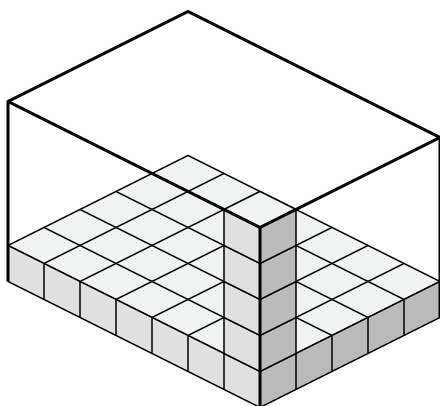
3)



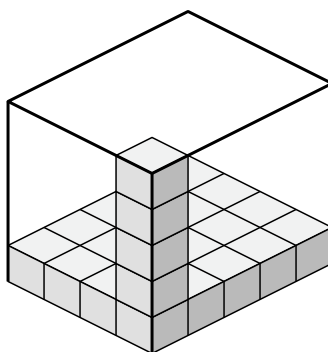
4)



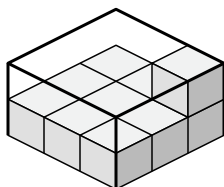
5)



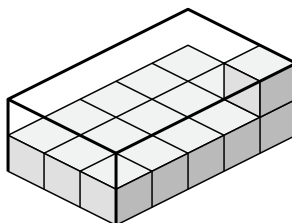
6)



7)



8)

**Answers**

1. **$80 u^3$**
2. **$140 u^3$**
3. **$48 u^3$**
4. **$48 u^3$**
5. **$175 u^3$**
6. **$100 u^3$**
7. **$18 u^3$**
8. **$30 u^3$**