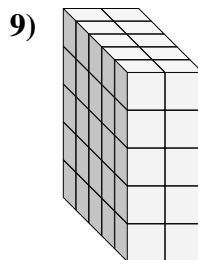
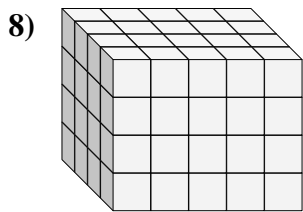
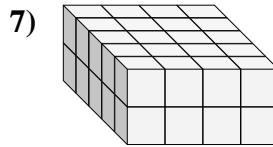
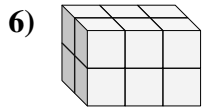
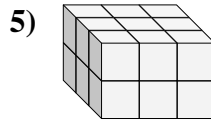
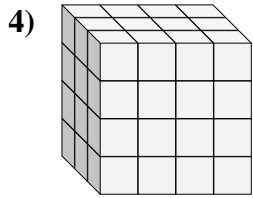
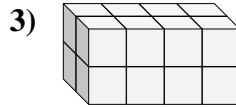
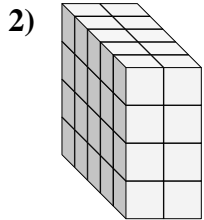
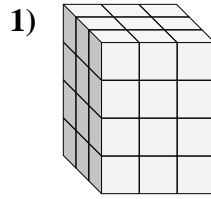
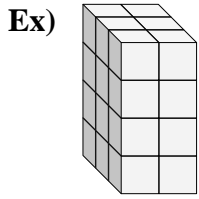




Find the length, width and height of the rectangular prism. Then find the volume.



Answers

Ex. 3 2 4 24

1. _____

2. _____

3. _____

4. _____

5. _____

6. _____

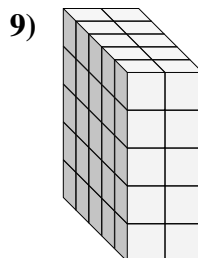
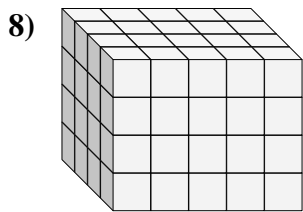
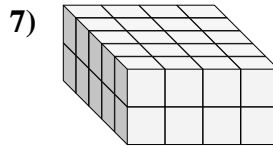
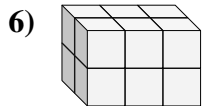
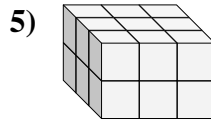
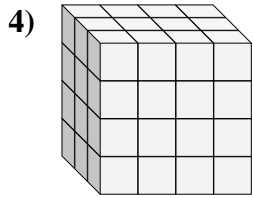
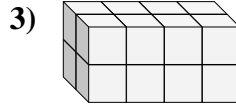
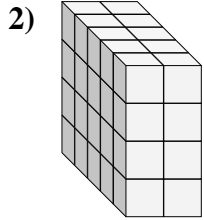
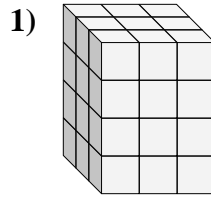
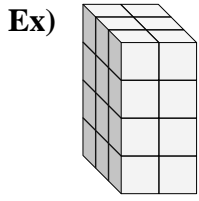
7. _____

8. _____

9. _____



Find the length, width and height of the rectangular prism. Then find the volume.



Answers

Ex. 3 2 4 24

1. 3 3 4 36

2. 5 2 4 40

3. 2 4 2 16

4. 3 4 4 48

5. 3 3 2 18

6. 2 3 2 12

7. 5 4 2 40

8. 4 5 4 80

9. 5 2 5 50