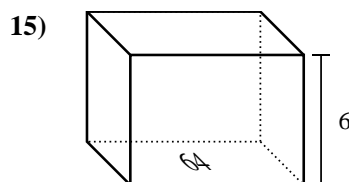
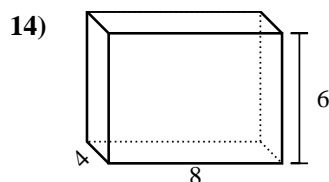
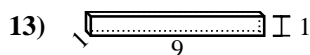
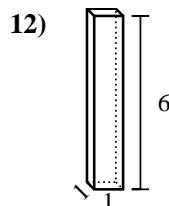
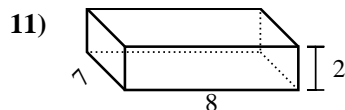
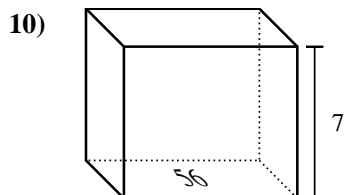
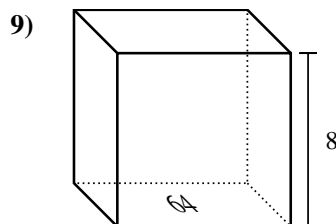
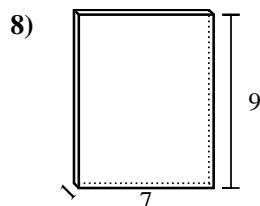
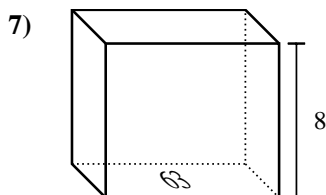
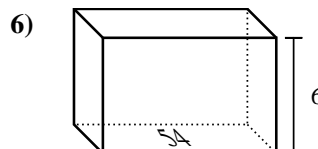
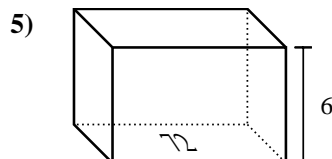
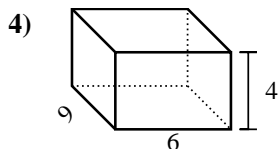
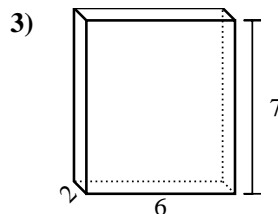
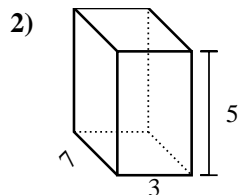
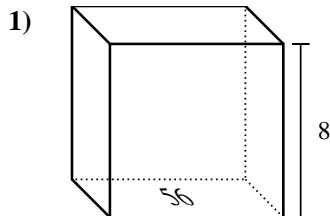




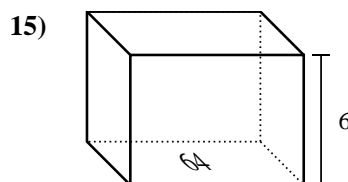
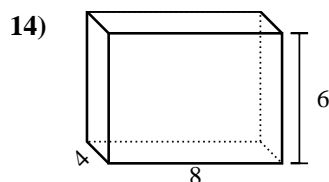
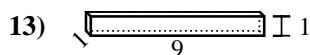
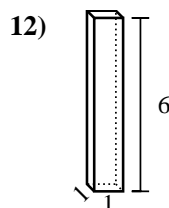
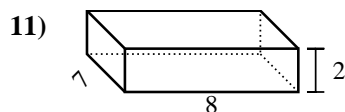
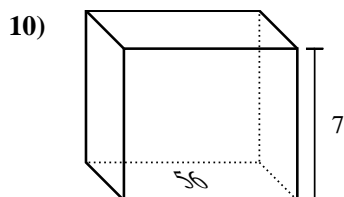
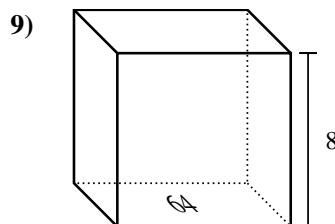
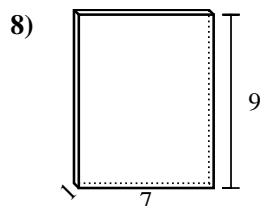
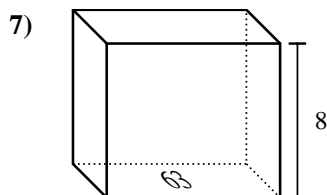
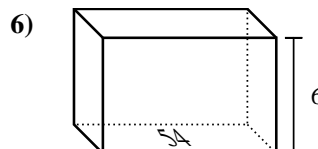
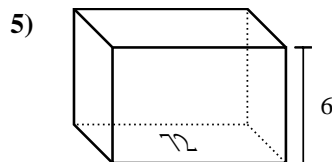
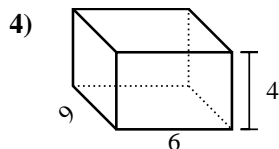
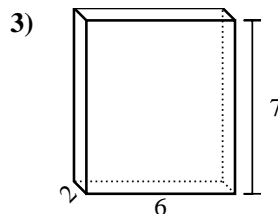
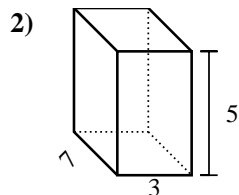
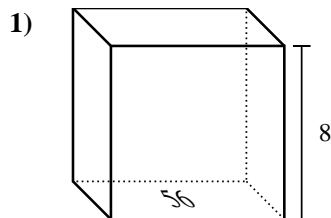
Find the volume of each rectangular prism. Units are in cm (not to scale). Remember $V = BH$ and $V = L \times W \times H$

Answers

1. _____
2. _____
3. _____
4. _____
5. _____
6. _____
7. _____
8. _____
9. _____
10. _____
11. _____
12. _____
13. _____
14. _____
15. _____



Find the volume of each rectangular prism. Units are in cm (not to scale). Remember $V = BH$ and $V = L \times W \times H$

**Answers**

1. **448 cm³**
2. **105 cm³**
3. **84 cm³**
4. **216 cm³**
5. **432 cm³**
6. **324 cm³**
7. **504 cm³**
8. **63 cm³**
9. **512 cm³**
10. **392 cm³**
11. **112 cm³**
12. **6 cm³**
13. **9 cm³**
14. **192 cm³**
15. **384 cm³**