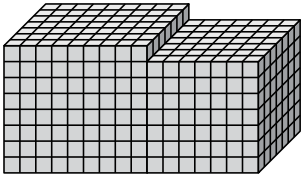




Find the total volume of each figure. Measurement is in cm (not to scale).

Answers

1)



1. _____

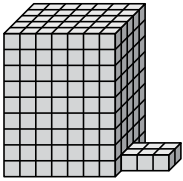
2. _____

3. _____

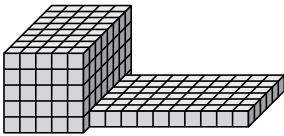
4. _____

5. _____

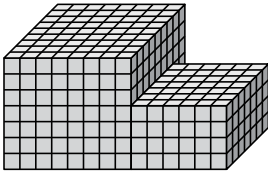
2)



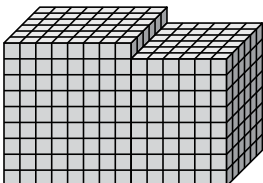
3)



4)

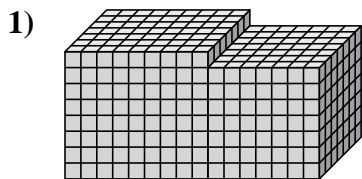


5)



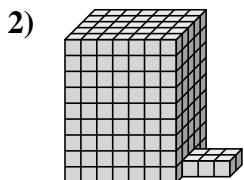


Find the total volume of each figure. Measurement is in cm (not to scale).



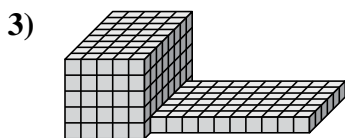
$$9 \times 7 \times 8 = 504$$

$$7 \times 7 \times 7 = 343$$



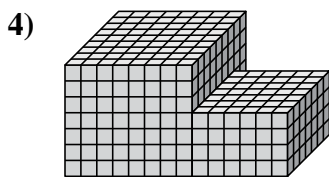
$$7 \times 5 \times 9 = 315$$

$$3 \times 2 \times 1 = 6$$



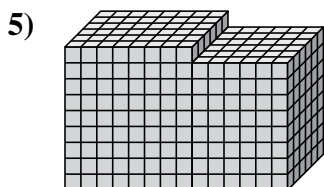
$$5 \times 8 \times 5 = 200$$

$$10 \times 6 \times 1 = 60$$



$$8 \times 9 \times 7 = 504$$

$$6 \times 7 \times 4 = 168$$



$$8 \times 6 \times 9 = 432$$

$$6 \times 6 \times 8 = 288$$

Answers

1. 847 cm³

2. 321 cm³

3. 260 cm³

4. 672 cm³

5. 720 cm³