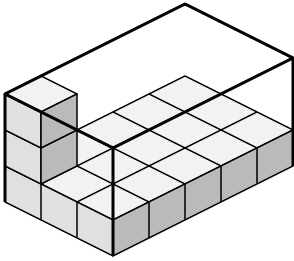




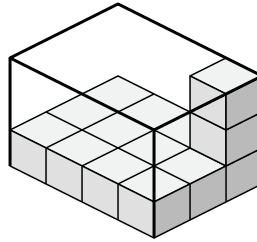
Create an expression to determine the volume of each box.

Answers

1)



2)



1. _____

2. _____

3. _____

4. _____

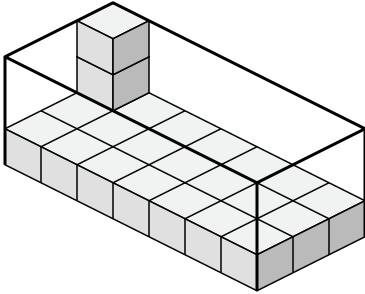
5. _____

6. _____

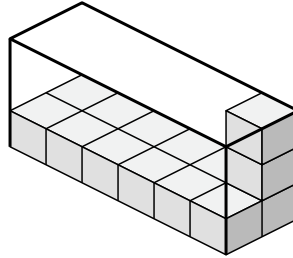
7. _____

8. _____

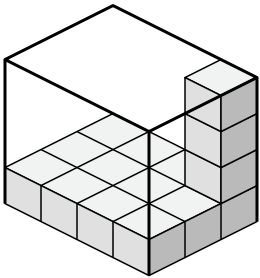
3)



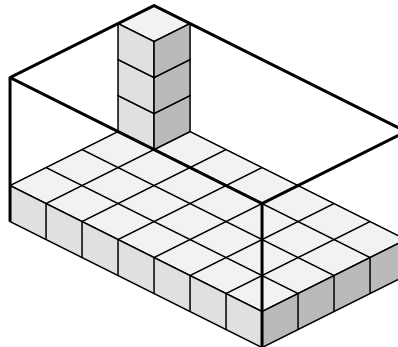
4)



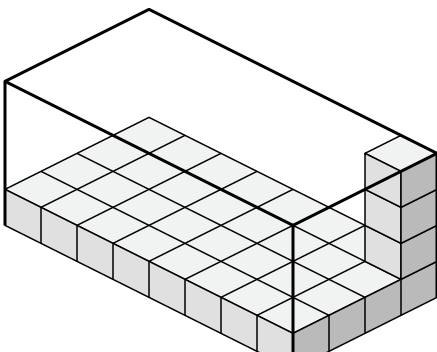
5)



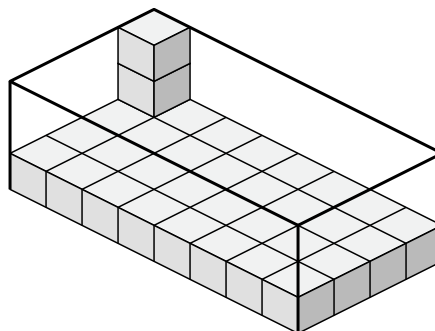
6)



7)



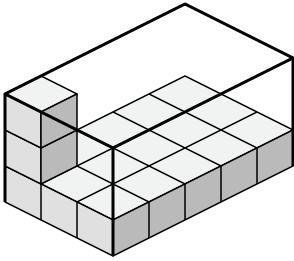
8)



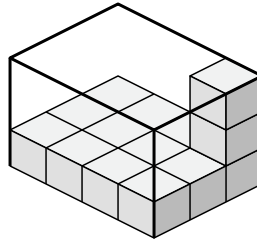


Create an expression to determine the volume of each box.

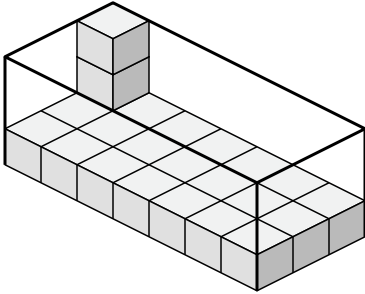
1)



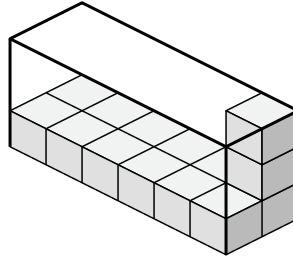
2)



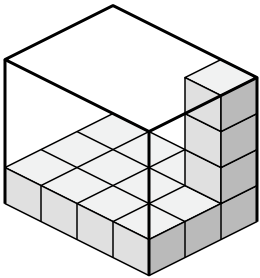
3)



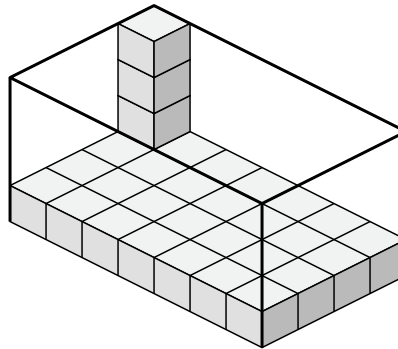
4)



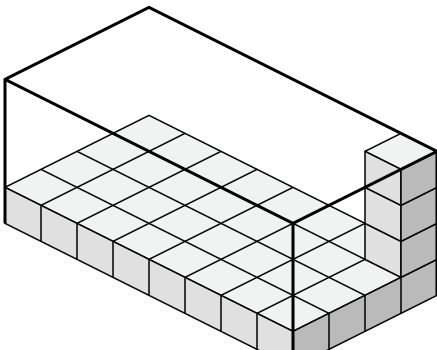
5)



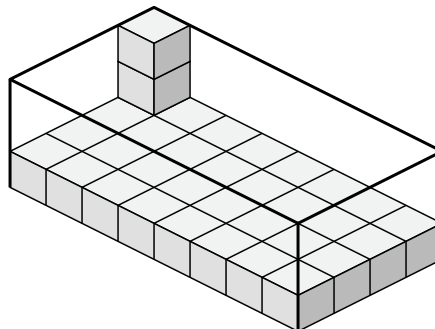
6)



7)



8)



Answers

1. $3 \times 5 \times 3$

2. $4 \times 3 \times 3$

3. $7 \times 3 \times 3$

4. $6 \times 2 \times 3$

5. $4 \times 3 \times 4$

6. $7 \times 4 \times 4$

7. $8 \times 4 \times 4$

8. $8 \times 4 \times 3$