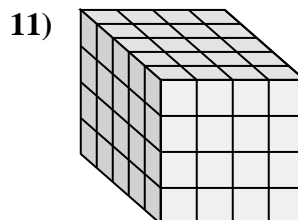
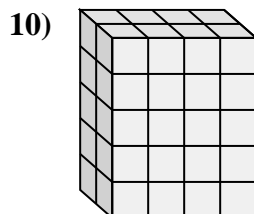
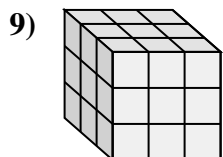
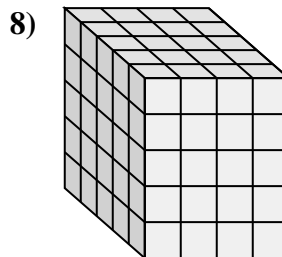
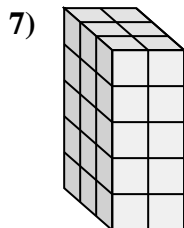
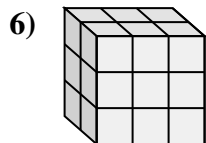
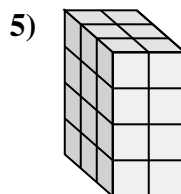
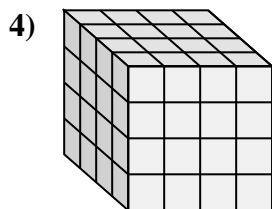
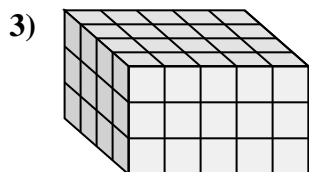
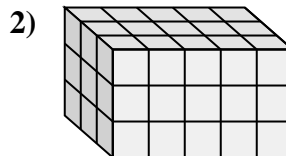
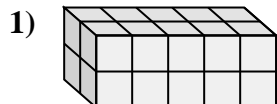
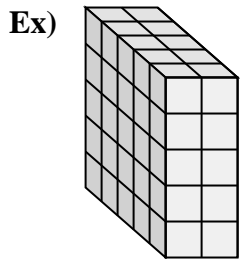






Match each problem with the equation that could represent it. Answer with the missing term and letter.



Answers

Ex. F, 2

1. I, 20

2. H, 3

3. B, 4

4. G, 4

5. D, 4

6. K, 2

7. A, 3

8. E, 5

9. C, 3

10. L, 5

11. J, 5

A.  $\_\_ \times 2 \times 5 = 30$

B.  $\_\_ \times 5 \times 3 = 60$

C.  $3 \times 3 \times \_\_ = 27$

D.  $3 \times 2 \times \_\_ = 24$

E.  $\_\_ \times 4 \times 5 = 100$

F.  $5 \times \_\_ \times 5 = 50$

G.  $\_\_ \times 4 \times 4 = 64$

H.  $3 \times 5 \times \_\_ = 45$

I.  $2 \times 5 \times 2 = \_\_$

J.  $\_\_ \times 4 \times 4 = 80$

K.  $\_\_ \times 3 \times 3 = 18$

L.  $2 \times 4 \times \_\_ = 40$





























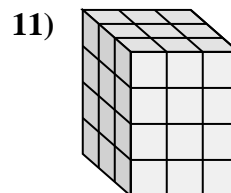
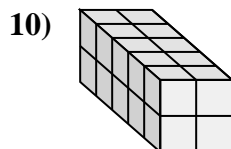
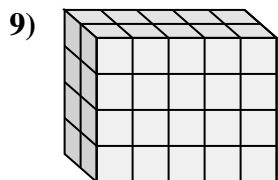
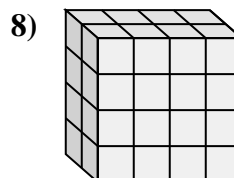
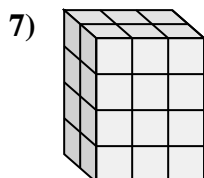
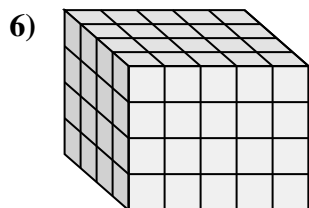
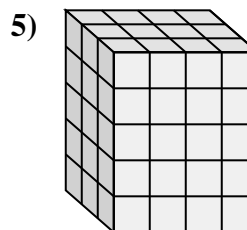
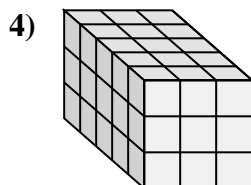
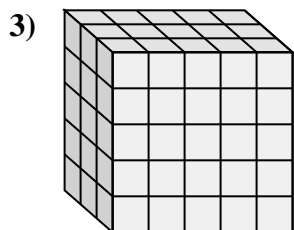
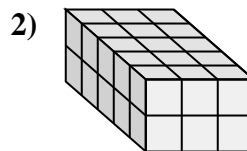
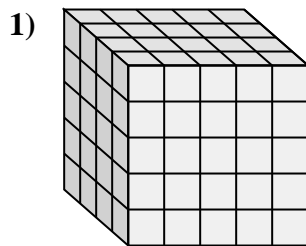
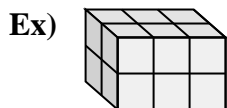








Match each problem with the equation that could represent it. Answer with the missing term and letter.



Answers

Ex. B, 2

1. I, 5

2. K, 30

3. H, 75

4. F, 5

5. A, 4

6. E, 4

7. D, 4

8. L, 2

9. C, 5

10. G, 2

11. J, 3

A.  $3 \times \underline{\quad} \times 5 = 60$

B.  $\underline{\quad} \times 3 \times 2 = 12$

C.  $2 \times \underline{\quad} \times 4 = 40$

D.  $2 \times 3 \times \underline{\quad} = 24$

E.  $4 \times 5 \times \underline{\quad} = 80$

F.  $\underline{\quad} \times 3 \times 3 = 45$

G.  $5 \times 2 \times \underline{\quad} = 20$

H.  $3 \times 5 \times 5 = \underline{\quad}$

I.  $4 \times 5 \times \underline{\quad} = 100$

J.  $\underline{\quad} \times 3 \times 4 = 36$

K.  $5 \times 3 \times 2 = \underline{\quad}$

L.  $\underline{\quad} \times 4 \times 4 = 32$



