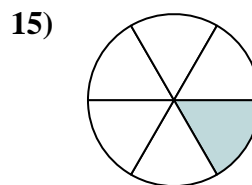
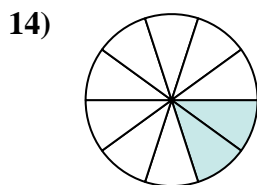
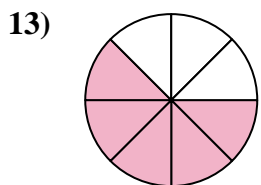
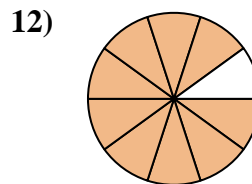
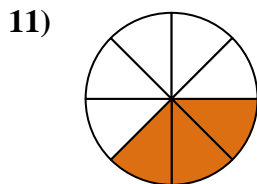
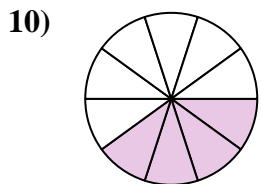
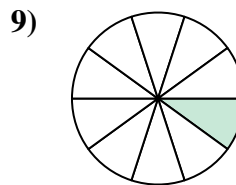
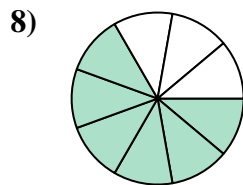
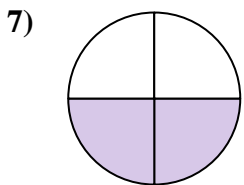
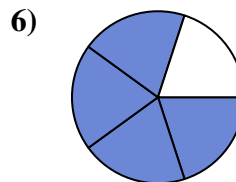
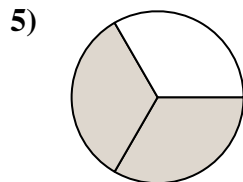
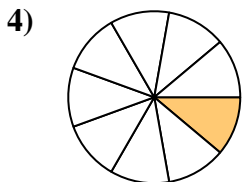
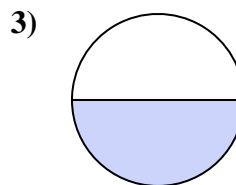
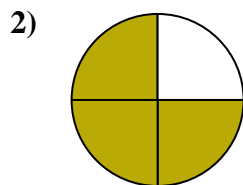
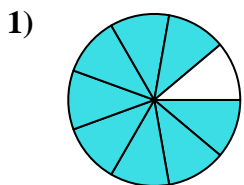




Find the angle (in degrees) of the shaded portion of the circle.

Answers



1. _____

2. _____

3. _____

4. _____

5. _____

6. _____

7. _____

8. _____

9. _____

10. _____

11. _____

12. _____

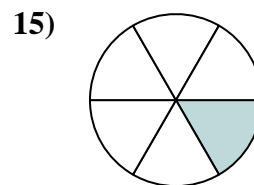
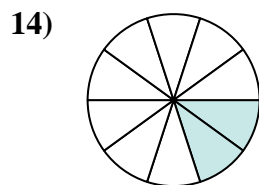
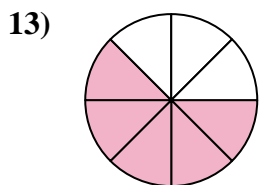
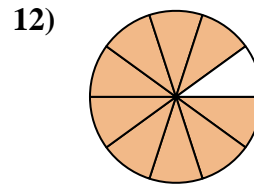
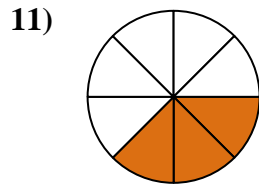
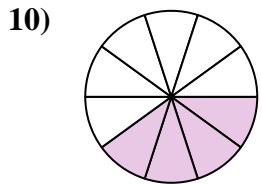
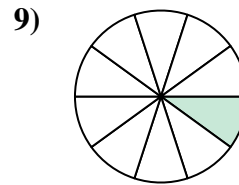
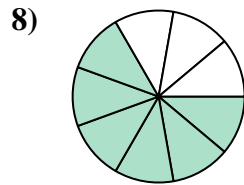
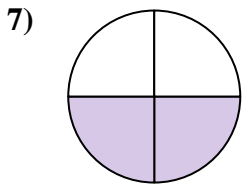
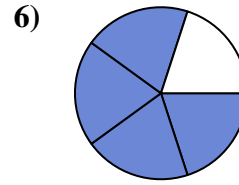
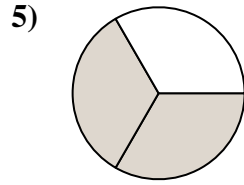
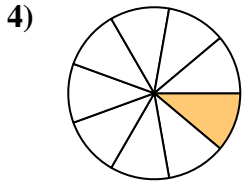
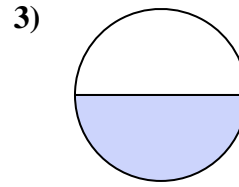
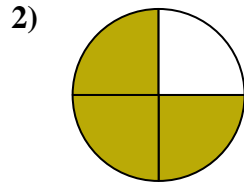
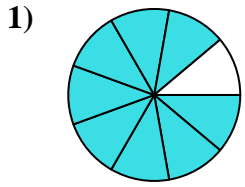
13. _____

14. _____

15. _____



Find the angle (in degrees) of the shaded portion of the circle.



Answers

1. 320

2. 270

3. 180

4. 40

5. 240

6. 288

7. 180

8. 240

9. 36

10. 144

11. 135

12. 324

13. 225

14. 72

15. 60



Find the angle (in degrees) of the shaded portion of the circle.

Answers

180

270

320

240

36

40

240

180

288

144

324

135

1. _____

2. _____

3. _____

4. _____

5. _____

6. _____

7. _____

8. _____

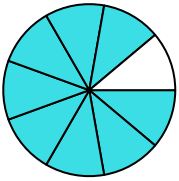
9. _____

10. _____

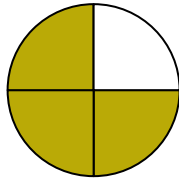
11. _____

12. _____

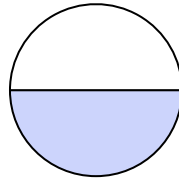
1)



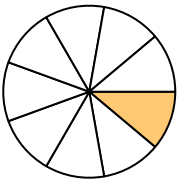
2)



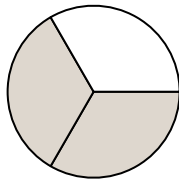
3)



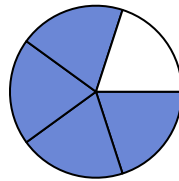
4)



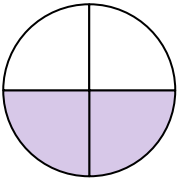
5)



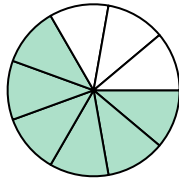
6)



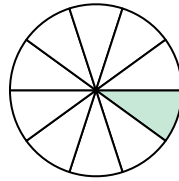
7)



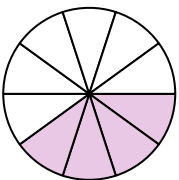
8)



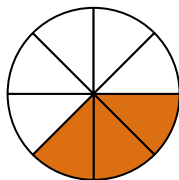
9)



10)



11)



12)

