



Solve each problem using a tape diagram.

Answers

- 1) Janet had 65 pencils. If she used 44 of them, how many would she have left?

- 2) Rachel listened to 81 songs on her mp3 player. 42 of them were pop and the rest were classical. How many classical songs did she listen to?

- 3) There were 87 people on the train. At the first stop 50 people got off. How many people are left on the train?

- 4) Vanessa had 44 3DS games. If she gave 19 to her friend, how many would she have left?

- 5) Amy had 43 photos on her computer. She deleted 27. How many photos does she have left?

- 6) A waiter has 45 customers. If 35 left, how many customers would the waiter still have?

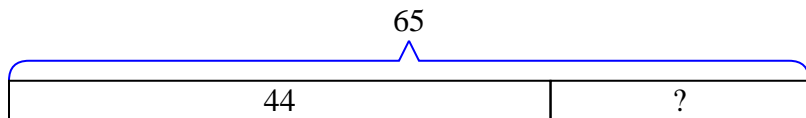
- 7) George had 85 cherries. He ate 38 of them. How many cherries does George have left?

- 1. _____
- 2. _____
- 3. _____
- 4. _____
- 5. _____
- 6. _____
- 7. _____

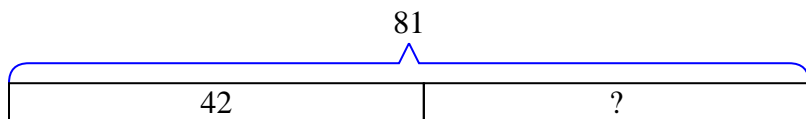


Solve each problem using a tape diagram.

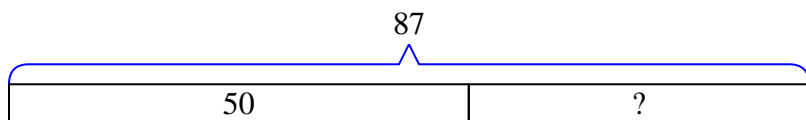
- 1) Janet had 65 pencils. If she used 44 of them, how many would she have left?



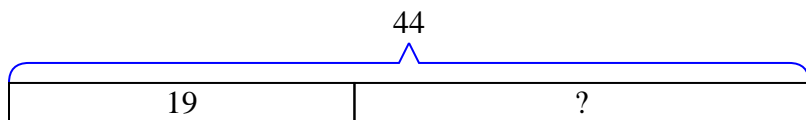
- 2) Rachel listened to 81 songs on her mp3 player. 42 of them were pop and the rest were classical. How many classical songs did she listen to?



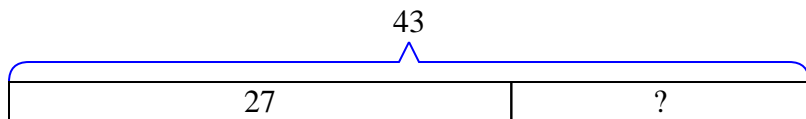
- 3) There were 87 people on the train. At the first stop 50 people got off. How many people are left on the train?



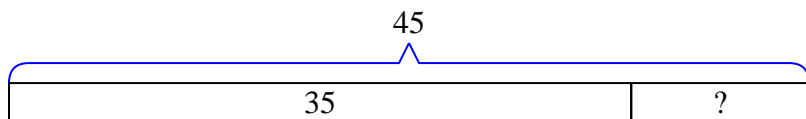
- 4) Vanessa had 44 3DS games. If she gave 19 to her friend, how many would she have left?



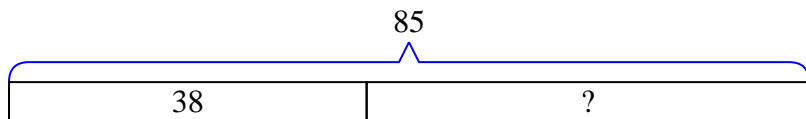
- 5) Amy had 43 photos on her computer. She deleted 27. How many photos does she have left?



- 6) A waiter has 45 customers. If 35 left, how many customers would the waiter still have?



- 7) George had 85 cherries. He ate 38 of them. How many cherries does George have left?

Answers1. **21**2. **39**3. **37**4. **25**5. **16**6. **10**7. **47**