



Solve each problem using a tape diagram.

Answers

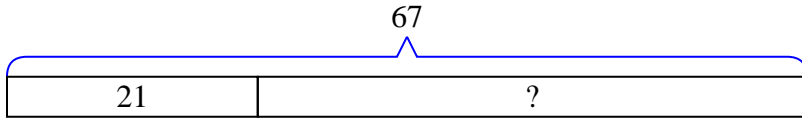
- 1) Debby had 67 pencils. If she used 21 of them, how many would she have left?
- 2) Olivia could send 71 text messages a day. If she sent 22, how many text messages does she have left she can send?
- 3) Oliver owned 80 video games for his Playstation and Xbox. 43 of the games were for Xbox. How many games does Oliver have for playstation?
- 4) George has \$61. He decides to spend \$14 on new video game. How much money would he have left?
- 5) A fast food restaurant sold 52 ice cream cones. They used waffle cones on 41 of them and the rest were sugar cones. How many sugar cones did they use?
- 6) A museum had 68 paintings. If they got rid of 41 of them, how many pictures would they have left?
- 7) Sam had 55 apps on his phone. He deleted 21 of them. How many apps does Sam have left?

1. _____
2. _____
3. _____
4. _____
5. _____
6. _____
7. _____

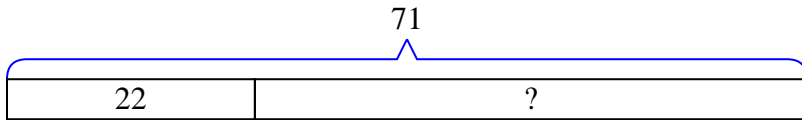


Solve each problem using a tape diagram.

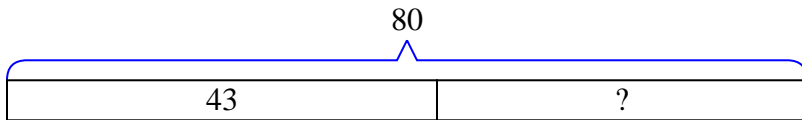
- 1) Debby had 67 pencils. If she used 21 of them, how many would she have left?



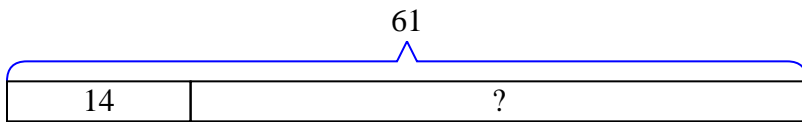
- 2) Olivia could send 71 text messages a day. If she sent 22, how many text messages does she have left she can send?



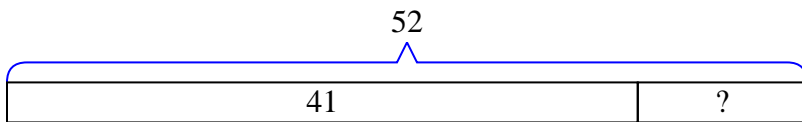
- 3) Oliver owned 80 video games for his Playstation and Xbox. 43 of the games were for Xbox. How many games does Oliver have for playstation?



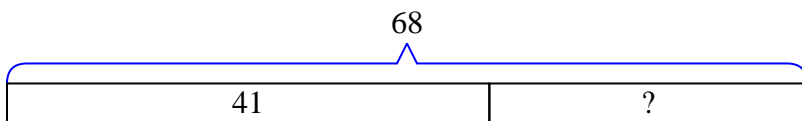
- 4) George has \$61. He decides to spend \$14 on new video game. How much money would he have left?



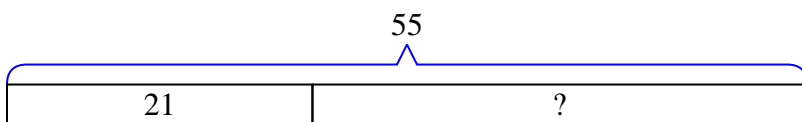
- 5) A fast food restaurant sold 52 ice cream cones. They used waffle cones on 41 of them and the rest were sugar cones. How many sugar cones did they use?



- 6) A museum had 68 paintings. If they got rid of 41 of them, how many pictures would they have left?



- 7) Sam had 55 apps on his phone. He deleted 21 of them. How many apps does Sam have left?



Answers

1. **46**

2. **49**

3. **37**

4. **47**

5. **11**

6. **27**

7. **34**