



Solve each problem using a tape diagram.

Answers

- 1) On Friday a game store sold 16 copies of the new Mario game. On Saturday they sold 5 times as many as on Friday. And then on Sunday they sold 5 less than the amount on Friday. How many did they sell total?

- 2) Amy, Billy and Carl were working on a school project. Amy spent 17 minutes on her portion. Billy spent 9 times as long on his portion. And Carl spent 5 minutes fewer than Billy did. How many minutes total were they working?

- 3) Katie was organizing her pictures on her computer. In folder 1 she had 27 pictures. In folder 2 she had 10 more pictures than folder 1. And in folder 3 she had 2 times as many pictures as folder 1. How many pictures does she have total?

- 4) In one day a restaurant used 11 knives. They used 10 more forks than they used knives. They also used 5 as many spoons as knives. How many utensils do they use in a day?

- 5) In one day George's Pizza Palace sold 21 sausage pizzas. They sold 8 fewer cheese pizzas and 2 times as many pepperoni pizzas. How many pizzas did they sell total?

1. _____

2. _____

3. _____


4. _____

5. _____

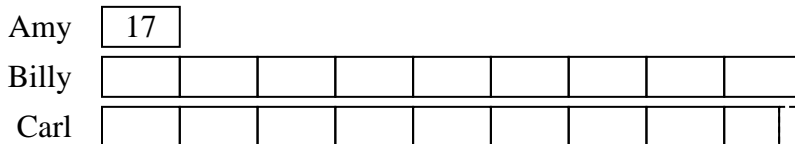


Solve each problem using a tape diagram.

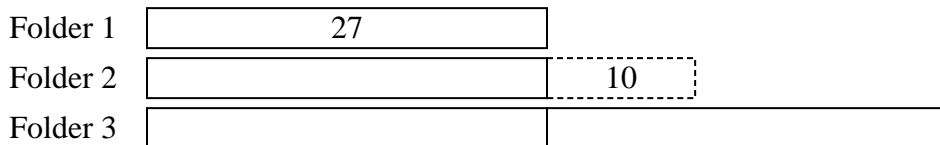
- 1) On Friday a game store sold 16 copies of the new Mario game. On Saturday they sold 5 times as many as on Friday. And then on Sunday they sold 5 less than the amount on Friday. How many did they sell total?



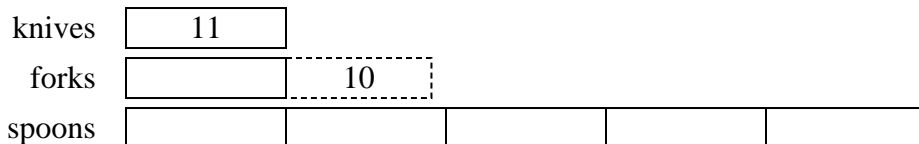
- 2) Amy, Billy and Carl were working on a school project. Amy spent 17 minutes on her portion. Billy spent 9 times as long on his portion. And Carl spent 5 minutes fewer than Billy did. How many minutes total were they working?



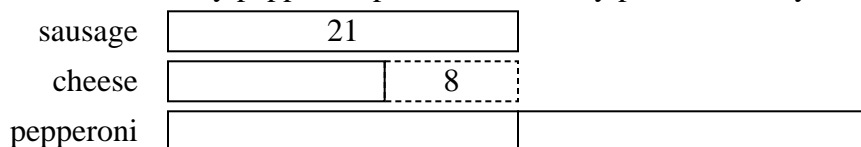
- 3) Katie was organizing her pictures on her computer. In folder 1 she had 27 pictures. In folder 2 she had 10 more pictures than folder 1. And in folder 3 she had 2 times as many pictures as folder 1. How many pictures does she have total?



- 4) In one day a restaurant used 11 knives. They used 10 more forks than they used knives. They also used 5 as many spoons as knives. How many utensils do they use in a day?



- 5) In one day George's Pizza Palace sold 21 sausage pizzas. They sold 8 fewer cheese pizzas and 2 times as many pepperoni pizzas. How many pizzas did they sell total?



Answers

1. **107**

2. **318**

3. **118**

4. **87**

5. **76**