

**Solve each problem using a tape diagram.****Answers**

Ex) Debby was trying to determine the weight of a small rock. She determined the small rock was $\frac{1}{2}$ as heavy as a medium rock. The medium rock was $\frac{2}{5}$ as heavy as a large rock. The large rock weighed 365 grams. How heavy was the small rock?

Ex. 73

1. _____

2. _____

3. _____

4. _____

1) Two years ago the fair had $\frac{1}{2}$ as many people as 1 year ago. 1 year ago the fair had $\frac{2}{6}$ as many people as this year. This year the fair had 150 people. How many people did the fair have 2 years ago?

2) Nancy was looking at her Nintendo collection. She had 480 wiiU games. She had $\frac{4}{5}$ as many DS games and $\frac{2}{4}$ as many 3ds games as DS games. How many 3ds games does she have?

3) On Super Bowl Sunday a store sold 406 sodas. They sold $\frac{3}{7}$ as many bags of chips. They also sold $\frac{2}{3}$ as many jars of dip as bags of chips. How many jars of dip did they sell?

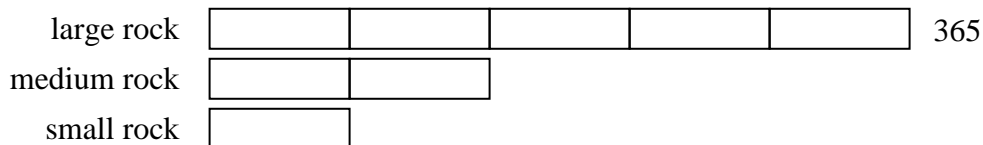
4) At the school fundraiser Adam earned \$890. Bianca earned $\frac{7}{10}$ as much as Adam. And Cathy earned $\frac{3}{7}$ as much as Bianca. How much did Cathy earn?



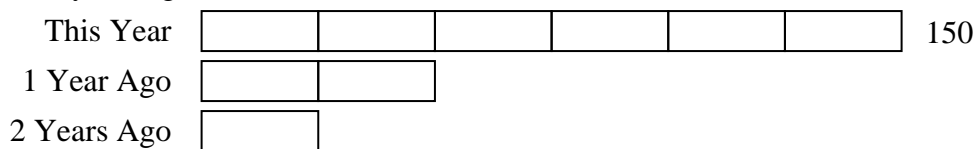
Solve each problem using a tape diagram.

Answers


- Ex) Debby was trying to determine the weight of a small rock. She determined the small rock was $\frac{1}{2}$ as heavy as a medium rock. The medium rock was $\frac{2}{5}$ as heavy as a large rock. The large rock weighed 365 grams. How heavy was the small rock?

Ex. 731. 252. 1923. 1164. 267

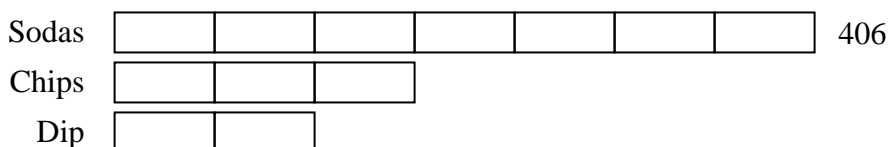
- 1) Two years ago the fair had $\frac{1}{2}$ as many people as 1 year ago. 1 year ago the fair had $\frac{2}{6}$ as many people as this year. This year the fair had 150 people. How many people did the fair have 2 years ago?



- 2) Nancy was looking at her Nintendo collection. She had 480 wiiU games. She had $\frac{4}{5}$ as many DS games and $\frac{2}{4}$ as many 3ds games as DS games. How many 3ds games does she have?



- 3) On Super Bowl Sunday a store sold 406 sodas. They sold $\frac{3}{7}$ as many bags of chips. They also sold $\frac{2}{3}$ as many jars of dip as bags of chips. How many jars of dip did they sell?



- 4) At the school fundraiser Adam earned \$890. Bianca earned $\frac{7}{10}$ as much as Adam. And Cathy earned $\frac{3}{7}$ as much as Bianca. How much did Cathy earn?

