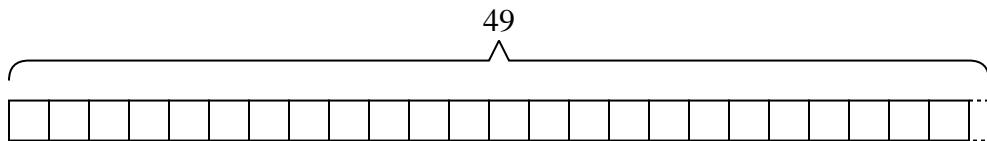




Solve each problem.

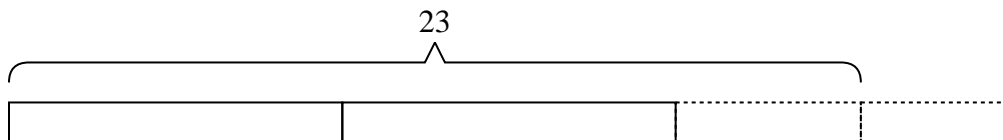
Answers

- 1) Debby is making bead necklaces. She wants to use {forty-nine} beads to make {two} necklaces. If she wants each necklace to have the same number of beads, how many beads will she have left over?



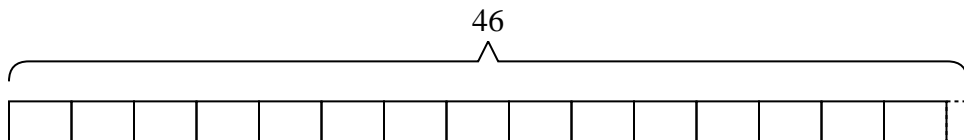
1. \_\_\_\_\_

- 2) At the carnival, {nine} friends bought {twenty-three} tickets. If they wanted to split all the tickets so each friend got the same amount, how many more tickets would they need to buy?



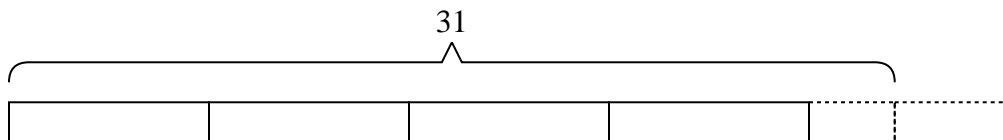
2. \_\_\_\_\_

- 3) A cafeteria was putting milk cartons into stacks. They had {forty-six} cartons and were putting them into stacks with {three} cartons in each stack. How many full stacks could they make?



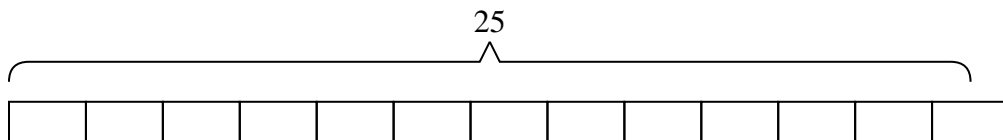
3. \_\_\_\_\_

- 4) George had {thirty-one} pieces of candy. If he wants to split the candy into {seven} bags with the same amount of candy in each bag, how many more pieces would he need to make sure each bag had the same amount?



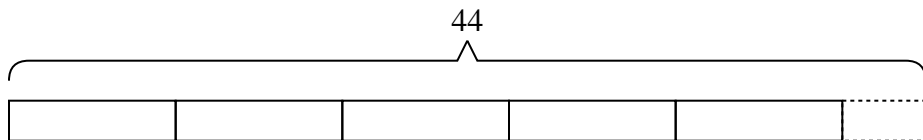
4. \_\_\_\_\_

- 5) There are {twenty-five} students going to a trivia competition. If each school van can hold {two} students, how many vans will they need?



5. \_\_\_\_\_

- 6) An airline has {forty-four} pieces of luggage to put away. If each luggage compartment will hold {eight} pieces of luggage, how many will be in the compartment that isn't full?

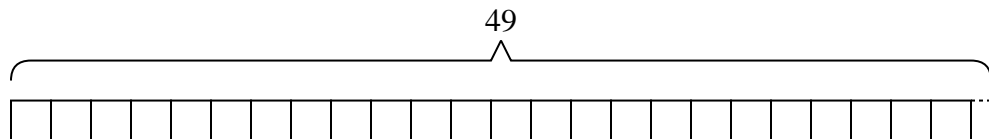


6. \_\_\_\_\_

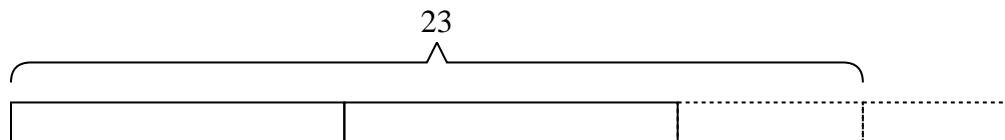


Solve each problem.

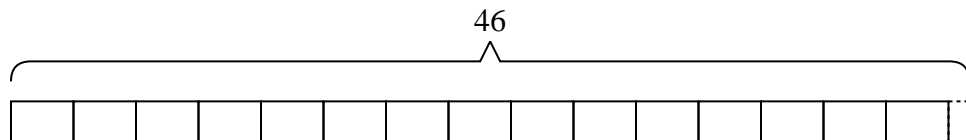
- 1) Debby is making bead necklaces. She wants to use {forty-nine} beads to make {two} necklaces. If she wants each necklace to have the same number of beads, how many beads will she have left over?



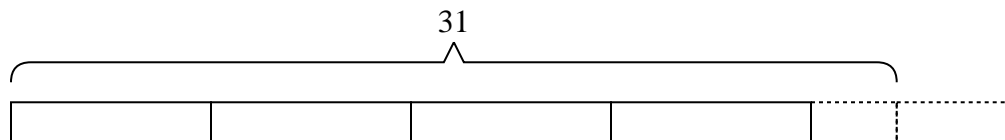
- 2) At the carnival, {nine} friends bought {twenty-three} tickets. If they wanted to split all the tickets so each friend got the same amount, how many more tickets would they need to buy?



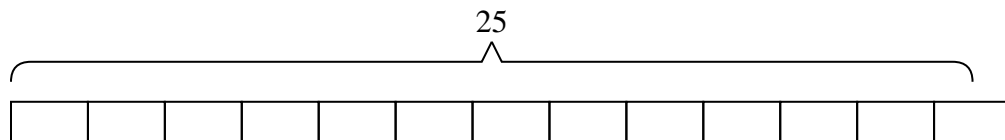
- 3) A cafeteria was putting milk cartons into stacks. They had {forty-six} cartons and were putting them into stacks with {three} cartons in each stack. How many full stacks could they make?



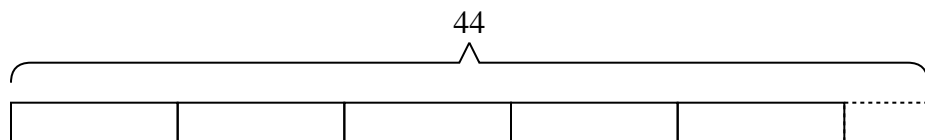
- 4) George had {thirty-one} pieces of candy. If he wants to split the candy into {seven} bags with the same amount of candy in each bag, how many more pieces would he need to make sure each bag had the same amount?



- 5) There are {twenty-five} students going to a trivia competition. If each school van can hold {two} students, how many vans will they need?



- 6) An airline has {forty-four} pieces of luggage to put away. If each luggage compartment will hold {eight} pieces of luggage, how many will be in the compartment that isn't full?



Answers

1. 1

2. 4

3. 15

4. 4

5. 13

6. 4