

**Solve each problem.****Answers**

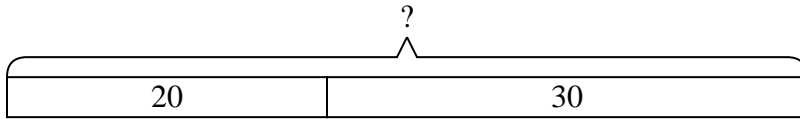
- 1) A store has 20 shirts. Later they got in 30 more shirts. How many shirts does the store have now?
- 2) At the arcade Ned had won 24 tickets. Later he won 18 more tickets. How many tickets did Ned have total?
- 3) Isabel had 23 sheets of paper in her desk and 32 more in her backpack. How many did she have total?
- 4) A fast food restaurant sold 33 small hotdogs and 15 large hotdogs. How many hotdogs did they sell total?
- 5) An aquarium had 15 fish in it. Later they added 32 fish. How many fish are in the aquarium now?
- 6) Robin had 15 pieces of candy. Her friend gave her 47 more pieces. How many pieces of candy did Robin have total?
- 7) Paul had 19 books. During the book fair he bought 23 more. How many books did Paul have total?

1. _____
2. _____
3. _____
4. _____
5. _____
6. _____
7. _____

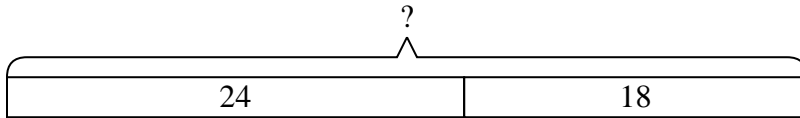


Solve each problem.

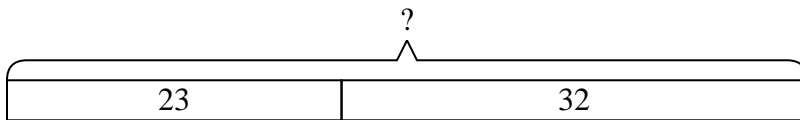
- 1) A store has 20 shirts. Later they got in 30 more shirts. How many shirts does the store have now?



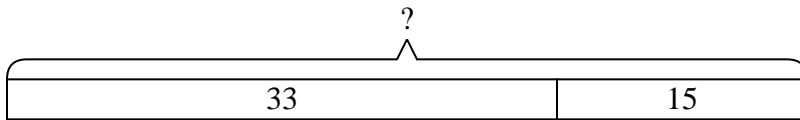
- 2) At the arcade Ned had won 24 tickets. Later he won 18 more tickets. How many tickets did Ned have total?



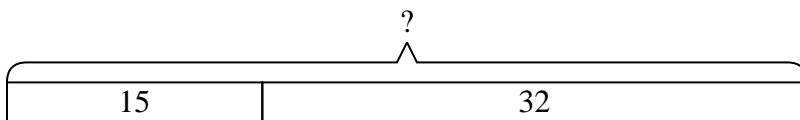
- 3) Isabel had 23 sheets of paper in her desk and 32 more in her backpack. How many did she have total?



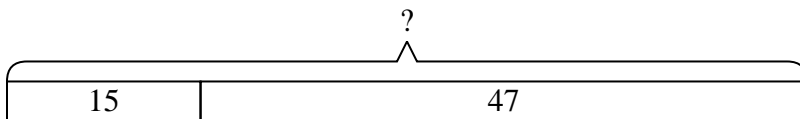
- 4) A fast food restaurant sold 33 small hotdogs and 15 large hotdogs. How many hotdogs did they sell total?



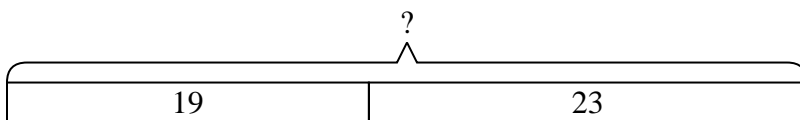
- 5) An aquarium had 15 fish in it. Later they added 32 fish. How many fish are in the aquarium now?



- 6) Robin had 15 pieces of candy. Her friend gave her 47 more pieces. How many pieces of candy did Robin have total?



- 7) Paul had 19 books. During the book fair he bought 23 more. How many books did Paul have total?

**Answers**

1. **50**
2. **42**
3. **55**
4. **48**
5. **47**
6. **62**
7. **42**