



Solve each problem.

Answers

- 1) Bianca had 49 sheets of paper in her desk and 23 more in her backpack. How many did she have total?

- 2) Luke collected 14 cans to recycle on Monday and 47 more on Tuesday. How many cans did Luke collect all together?

- 3) Katie received 24 text messages before noon and another 28 after noon. How many text messages did Katie receive total?

- 4) Carol had 18 DS games and her friend had 44 games. How many do they have total?

- 5) A restaurant sold 25 sodas in the morning and 42 in the afternoon. How many sodas did they sell total?

- 6) On Facebook Olivia had 20 photos of her friends and 32 photos of her family. How many photos did she have total?

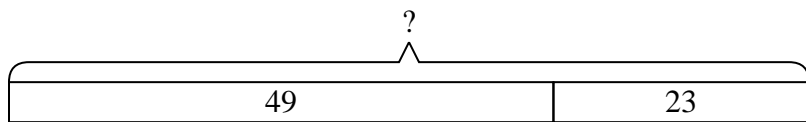
- 7) A clown gave away 43 balloons to girls and 45 balloons to boys. How many balloons did he give away total?

1. _____
2. _____
3. _____
4. _____
5. _____
6. _____
7. _____

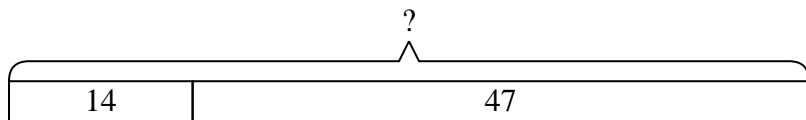


Solve each problem.

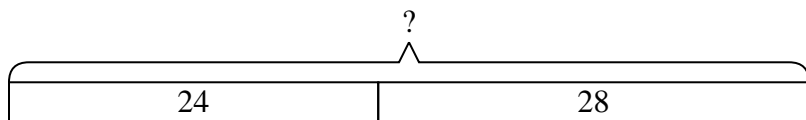
- 1) Bianca had 49 sheets of paper in her desk and 23 more in her backpack. How many did she have total?



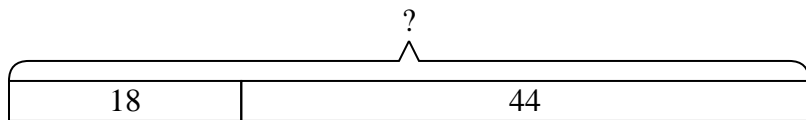
- 2) Luke collected 14 cans to recycle on Monday and 47 more on Tuesday. How many cans did Luke collect all together?



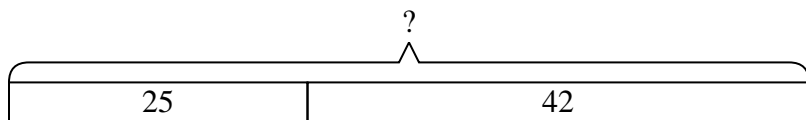
- 3) Katie received 24 text messages before noon and another 28 after noon. How many text messages did Katie receive total?



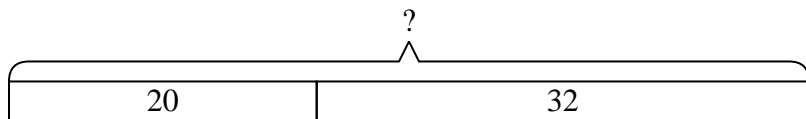
- 4) Carol had 18 DS games and her friend had 44 games. How many do they have total?



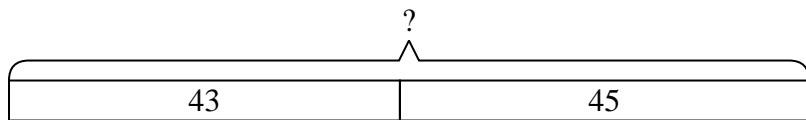
- 5) A restaurant sold 25 sodas in the morning and 42 in the afternoon. How many sodas did they sell total?



- 6) On Facebook Olivia had 20 photos of her friends and 32 photos of her family. How many photos did she have total?



- 7) A clown gave away 43 balloons to girls and 45 balloons to boys. How many balloons did he give away total?



Answers

1. 72

2. 61

3. 52

4. 62

5. 67

6. 52

7. 88