

**Solve each problem.****Answers**

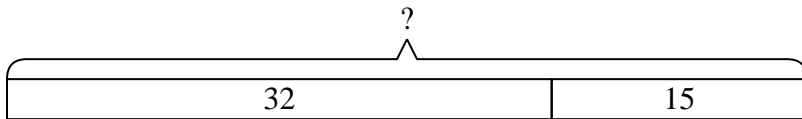
- 1) There were 32 people in line at lunch when 15 more got in line. How many people were there total in line?
- 2) Olivia spent 22 minutes drawing at school and 49 minutes drawing at home. How many minutes total did she spend drawing?
- 3) Vanessa received 43 text messages before noon and another 37 after noon. How many text messages did Vanessa receive total?
- 4) For a party George spent 14 dollars on food and 47 dollars on drinks. How much did George spend total?
- 5) On Facebook Janet had 41 photos of her friends and 11 photos of her family. How many photos did she have total?
- 6) A store sold 41 cold drinks and 27 hot drinks. How many drinks did they sell total?
- 7) A clown gave away 21 balloons to girls and 34 balloons to boys. How many balloons did he give away total?

1. _____
2. _____
3. _____
4. _____
5. _____
6. _____
7. _____

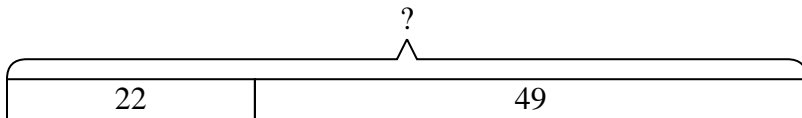


Solve each problem.

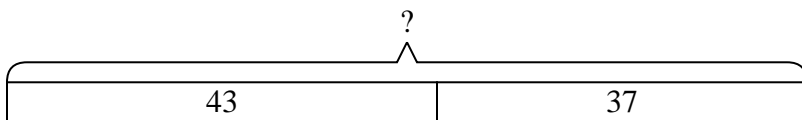
- 1) There were 32 people in line at lunch when 15 more got in line. How many people were there total in line?



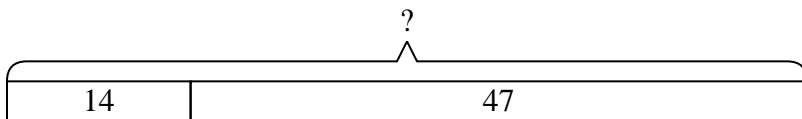
- 2) Olivia spent 22 minutes drawing at school and 49 minutes drawing at home. How many minutes total did she spend drawing?



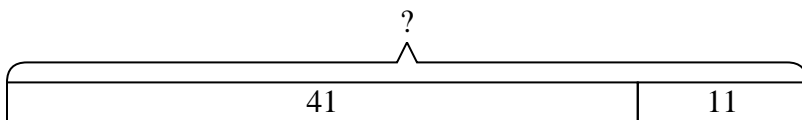
- 3) Vanessa received 43 text messages before noon and another 37 after noon. How many text messages did Vanessa receive total?



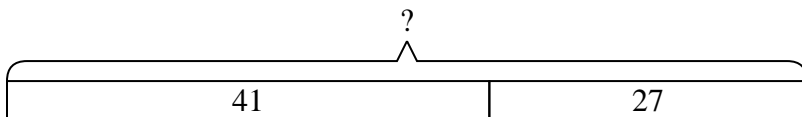
- 4) For a party George spent 14 dollars on food and 47 dollars on drinks. How much did George spend total?



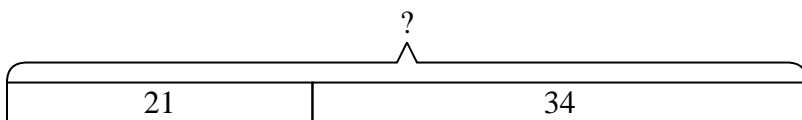
- 5) On Facebook Janet had 41 photos of her friends and 11 photos of her family. How many photos did she have total?



- 6) A store sold 41 cold drinks and 27 hot drinks. How many drinks did they sell total?



- 7) A clown gave away 21 balloons to girls and 34 balloons to boys. How many balloons did he give away total?

**Answers**

1. **47**
2. **71**
3. **80**
4. **61**
5. **52**
6. **68**
7. **55**