

**Solve each problem.****Answers**

1) A clown gave away 20 balloons to girls and 27 balloons to boys. How many balloons did he give away total?

1. \_\_\_\_\_

2) On Facebook Robin had 26 photos of her friends and 48 photos of her family. How many photos did she have total?

2. \_\_\_\_\_

3) A pet store had 22 birds that talked and 17 that didn't. How many birds did the pet store have total?

3. \_\_\_\_\_

4) Carol had 29 DS games and her friend had 42 games. How many do they have total?

4. \_\_\_\_\_

5) A restaurant sold 41 sodas in the morning and 50 in the afternoon. How many sodas did they sell total?

5. \_\_\_\_\_

6) For Halloween Tom got 35 ounces of candy and Vanessa got 12 ounces of candy. What is the combined weight they received?

6. \_\_\_\_\_

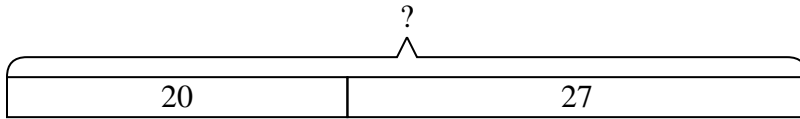
7) A store sold 43 cold drinks and 33 hot drinks. How many drinks did they sell total?

7. \_\_\_\_\_

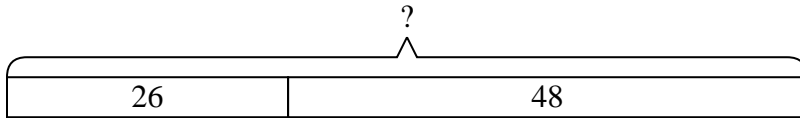


Solve each problem.

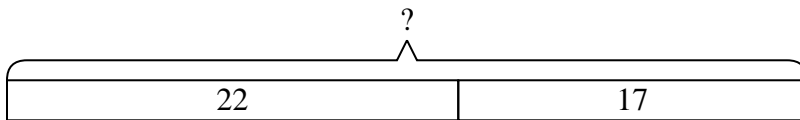
- 1) A clown gave away 20 balloons to girls and 27 balloons to boys. How many balloons did he give away total?



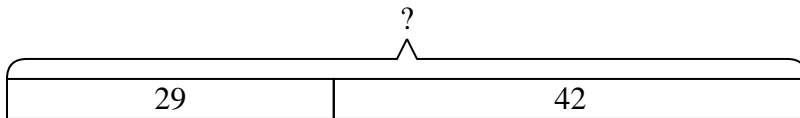
- 2) On Facebook Robin had 26 photos of her friends and 48 photos of her family. How many photos did she have total?



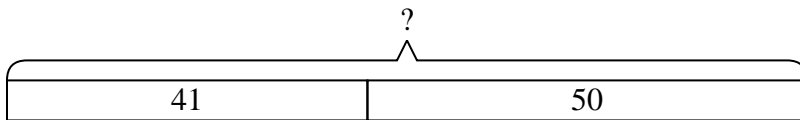
- 3) A pet store had 22 birds that talked and 17 that didn't. How many birds did the pet store have total?



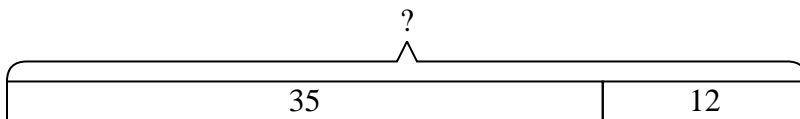
- 4) Carol had 29 DS games and her friend had 42 games. How many do they have total?



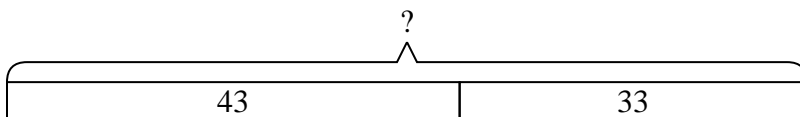
- 5) A restaurant sold 41 sodas in the morning and 50 in the afternoon. How many sodas did they sell total?



- 6) For Halloween Tom got 35 ounces of candy and Vanessa got 12 ounces of candy. What is the combined weight they received?



- 7) A store sold 43 cold drinks and 33 hot drinks. How many drinks did they sell total?

**Answers**

1. **47**  
2. **74**  
3. **39**  
4. **71**  
5. **91**  
6. **47**  
7. **76**