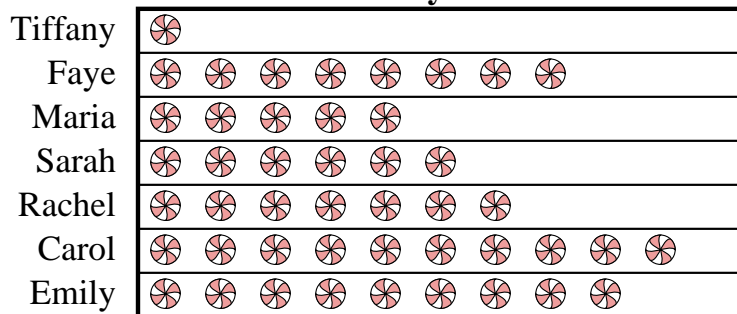





Carol and her friends were comparing the amount of candy they received on Halloween. They recorded their information in the pictograph below.


Candy Haul

 = 6 kilograms of candy

- 1) How many kilograms of candy did Maria get?
- 2) Who got the most candy?
- 3) Who got more candy, Tiffany or Faye?
- 4) Who got exactly 36 kilograms of candy?
- 5) Who got the least amount of candy?

Will and his friends were trying to see who could catch the most bugs in a day. They recorded their information in the pictograph below.

Bug Catching Contest

 = 4 Bugs

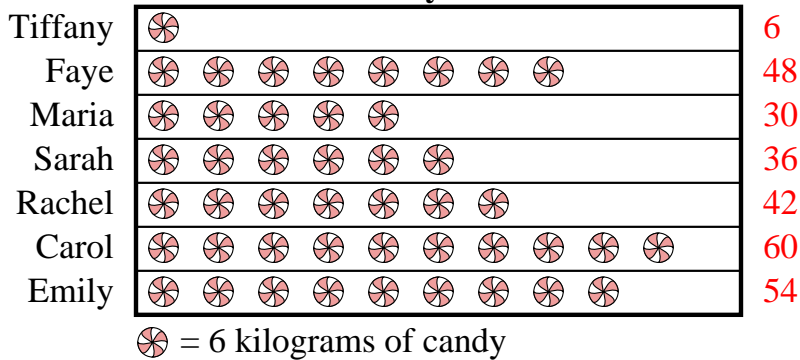
- 6) Who caught exactly 28 bugs?
- 7) Who caught the fewest number of bugs?
- 8) Who caught more bugs, George or Cody?
- 9) How many bugs did Henry catch?
- 10) Who caught the greatest number of bugs?

Answers

1. _____
2. _____
3. _____
4. _____
5. _____
6. _____
7. _____
8. _____
9. _____
10. _____




Carol and her friends were comparing the amount of candy they received on Halloween. They recorded their information in the pictograph below.

Candy Haul

- 1) How many kilograms of candy did Maria get?
- 2) Who got the most candy?
- 3) Who got more candy, Tiffany or Faye?
- 4) Who got exactly 36 kilograms of candy?
- 5) Who got the least amount of candy?

Will and his friends were trying to see who could catch the most bugs in a day. They recorded their information in the pictograph below.

Bug Catching Contest

- 6) Who caught exactly 28 bugs?
- 7) Who caught the fewest number of bugs?
- 8) Who caught more bugs, George or Cody?
- 9) How many bugs did Henry catch?
- 10) Who caught the greatest number of bugs?

Answers

1. **30**
2. **Carol**
3. **Faye**
4. **Sarah**
5. **Tiffany**
6. **Ned**
7. **Jerry**
8. **Cody**
9. **12**
10. **Cody**