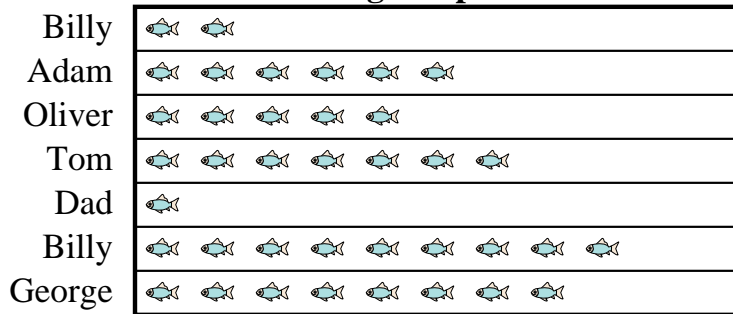





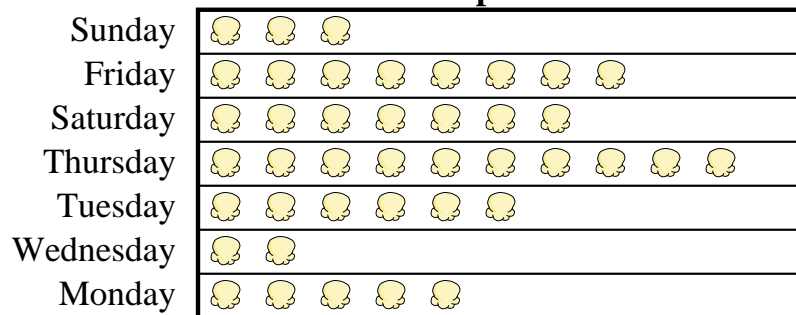
Adam's father took Adam and 5 friends on a fishing trip. They recorded the number of fish they caught using the pictograph below.

**Fishing Trip Results**

 = 9 Fish Caught

- 1) Who caught more fish, Billy or Adam?
- 2) How many fish did Oliver catch?
- 3) Who caught the most fish?
- 4) Who caught the fewest fish?
- 5) Who caught exactly 63 fish?

A movie theater was tracking the number of small popcorns they sold each day. They organized the information in the pictograph below.

**Small Popcorns Sold**

 = 8 Bags Sold

- 6) Which day did they sell exactly 80 bags?
- 7) Which day did they sell the most popcorn?
- 8) Which day did they sell more popcorn, Sunday or Friday?
- 9) How many bags did they sell on Saturday?
- 10) Which day did they sell the least amount of popcorn?






































**Answers**


1. \_\_\_\_\_
2. \_\_\_\_\_
3. \_\_\_\_\_
4. \_\_\_\_\_
5. \_\_\_\_\_
6. \_\_\_\_\_
7. \_\_\_\_\_
8. \_\_\_\_\_
9. \_\_\_\_\_
10. \_\_\_\_\_



Adam's father took Adam and 5 friends on a fishing trip. They recorded the number of fish they caught using the pictograph below.

**Fishing Trip Results**




































Billy	 	18
Adam	     	54
Oliver	    	45
Tom	      	63
Dad		9
Billy	       	81
George	       	72

 = 9 Fish Caught

- 1) Who caught more fish, Billy or Adam?
- 2) How many fish did Oliver catch?
- 3) Who caught the most fish?
- 4) Who caught the fewest fish?
- 5) Who caught exactly 63 fish?

A movie theater was tracking the number of small popcorns they sold each day. They organized the information in the pictograph below.

**Small Popcorns Sold**

Sunday	  	24
Friday	      	64
Saturday	     	56
Thursday	       	80
Tuesday	    	48
Wednesday	 	16
Monday	   	40

 = 8 Bags Sold

- 6) Which day did they sell exactly 80 bags?
- 7) Which day did they sell the most popcorn?
- 8) Which day did they sell more popcorn, Sunday or Friday?
- 9) How many bags did they sell on Saturday?
- 10) Which day did they sell the least amount of popcorn?

**Answers**

1. **Billy**
2. **45**
3. **Billy**
4. **Dad**
5. **Tom**
6. **Thursday**
7. **Thursday**
8. **Friday**
9. **56**
10. **Wednesday**