




Use the scale to answer each question.


Answers

1)




What is the weight (in pounds) of the block?

2)




If the block shown were 8 ounces heavier, how much would it weigh?

3)



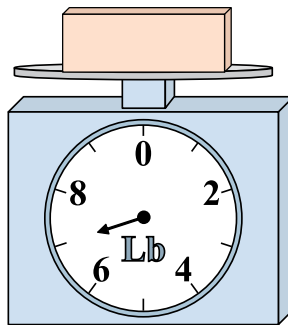
If you have 2 blocks that are the same weight, how many pounds total do the blocks weigh?

4)




If you have 8 blocks that are the same weight, how many ounces total do the blocks weigh?

5)




If the block shown were 2 pounds heavier, how much would it weigh?

6)




If the block shown were 4 ounces lighter, how much would it weigh?

7)



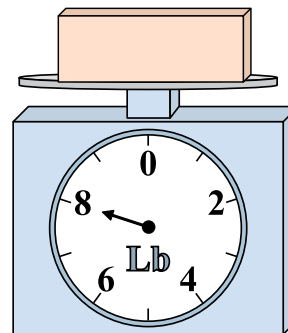
If you have 8 blocks that are the same weight, how many pounds total do the blocks weigh?

8)



What is the weight (in ounces) of the block?

9)

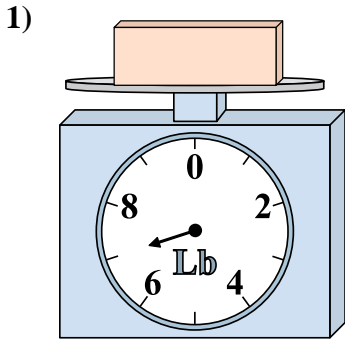


If the block shown were 3 pounds lighter, how much would it weigh?

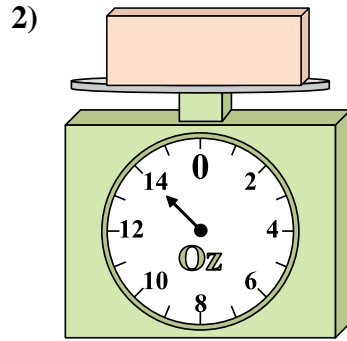
1. _____
2. _____
3. _____
4. _____
5. _____
6. _____
7. _____
8. _____
9. _____



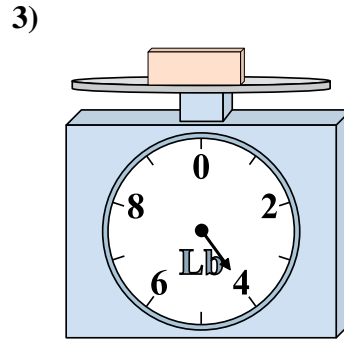
Use the scale to answer each question.



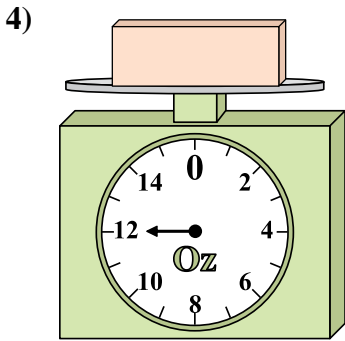
What is the weight (in pounds) of the block?



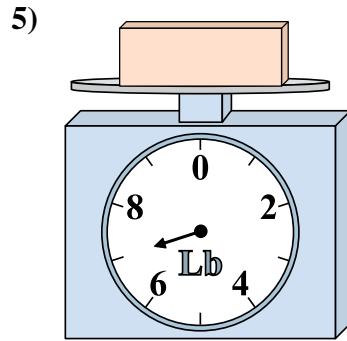
If the block shown were 8 ounces heavier, how much would it weigh?



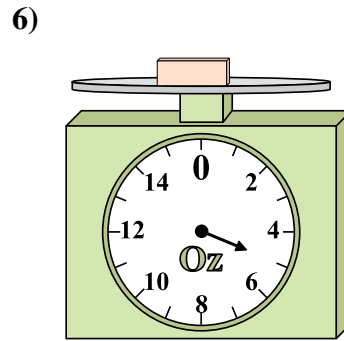
If you have 2 blocks that are the same weight, how many pounds total do the blocks weigh?



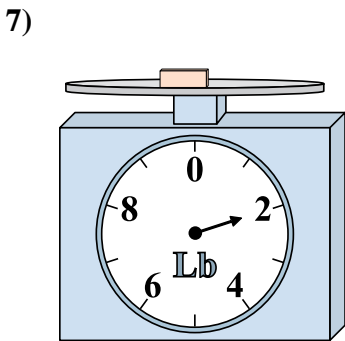
If you have 8 blocks that are the same weight, how many ounces total do the blocks weigh?



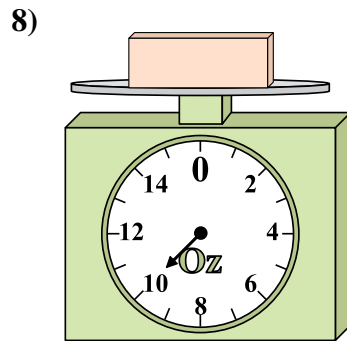
If the block shown were 2 pounds heavier, how much would it weigh?



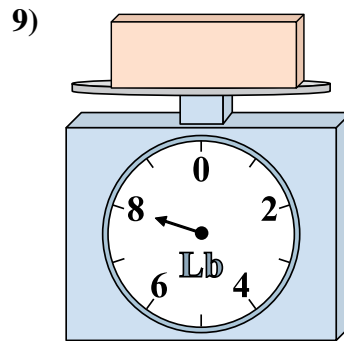
If the block shown were 4 ounces lighter, how much would it weigh?



If you have 8 blocks that are the same weight, how many pounds total do the blocks weigh?



What is the weight (in ounces) of the block?



If the block shown were 3 pounds lighter, how much would it weigh?

Answers

1. 7
2. 22
3. 8
4. 96
5. 9
6. 1
7. 16
8. 10
9. 5