




Determine which letter best represents the weight.

Ounce (oz)

Pound (lb)

An ounce is about the weight of a slice of bread.

A pound is about the weight of a can of vegetables.




Remember:

There are 16 ounces in 1 pound.

Answers

- 1. _____
- 2. _____
- 3. _____
- 4. _____
- 5. _____
- 6. _____
- 7. _____
- 8. _____
- 9. _____

1)



Apple

- A. 5 pounds
- B. 7 ounces
- C. 10 pounds
- D. 0.1 ounces

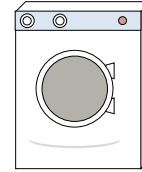
2)



Spoon

- A. 10 pounds
- B. 7 pounds
- C. 0.8 ounces
- D. 0.11 ounces


3)



Washing Machine

- A. 165 pounds
- B. 16 pounds
- C. 0.2 ounces
- D. 3 tons


4)



Notebook Paper

- A. 10 ounces
- B. 3 ounces
- C. 0.1 ounces
- D. 2 pounds

5)



Popcorn

- A. 0.3 pounds
- B. 2 pounds
- C. 10 ounces
- D. 0.04 ounces


6)



Pencil

- A. 1 ounce
- B. 2 pounds
- C. 0.01 ounces
- D. 44 pounds

7)



Football

- A. 0.9 ounces
- B. 1 pound
- C. 65 pounds
- D. 13 pounds

8)



Candle

- A. 0.2 ounces
- B. 20 pounds
- C. 1 pound
- D. 16 ounces

9)



Strawberry


- A. 11 ounces
- B. 0.5 pounds
- C. 0.5 ounces
- D. 1 pound



Determine which letter best represents the weight.

Ounce (oz)

An ounce is about the weight of a slice of bread.




Pound (lb)

A pound is about the weight of a can of vegetables.



Remember:
There are 16 ounces in 1 pound.

1)



Apple

- A. 5 pounds
- B. 7 ounces
- C. 10 pounds
- D. 0.1 ounces

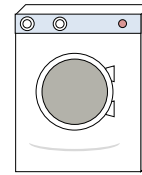
2)



Spoon

- A. 10 pounds
- B. 7 pounds
- C. 0.8 ounces
- D. 0.11 ounces


3)



Washing Machine

- A. 165 pounds
- B. 16 pounds
- C. 0.2 ounces
- D. 3 tons


4)



Notebook Paper

- A. 10 ounces
- B. 3 ounces
- C. 0.1 ounces
- D. 2 pounds

5)



Popcorn

- A. 0.3 pounds
- B. 2 pounds
- C. 10 ounces
- D. 0.04 ounces

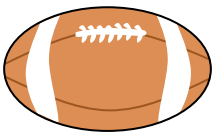
6)



Pencil

- A. 1 ounce
- B. 2 pounds
- C. 0.01 ounces
- D. 44 pounds

7)



Football

- A. 0.9 ounces
- B. 1 pound
- C. 65 pounds
- D. 13 pounds

8)



Candle

- A. 0.2 ounces
- B. 20 pounds
- C. 1 pound
- D. 16 ounces

9)



Strawberry

- A. 11 ounces
- B. 0.5 pounds
- C. 0.5 ounces
- D. 1 pound

Answers

- 1. **B**
- 2. **C**
- 3. **A**
- 4. **C**
- 5. **D**
- 6. **A**
- 7. **B**
- 8. **A**
- 9. **C**